

Year 4
Mental Maths
Test 2 Week 4



Term 3

Instructions

- Test 2 (end of week 4)
- Listen carefully to each question. I will read each question twice before you write your answer

5 second response

Question 1

Write the number

**Seven thousand and
eighty one.**

Question 2

What is the total of

8, 9 and 12?

Question 3

How many less than 77 is
36?

Question 4

Make the smallest
number you can from



Question 5

Round 547ml to the nearest 100 millilitres.

Question 6

What is the product of 9
and 7?

Question 7

What is 130 divided
by 10?

Question 8

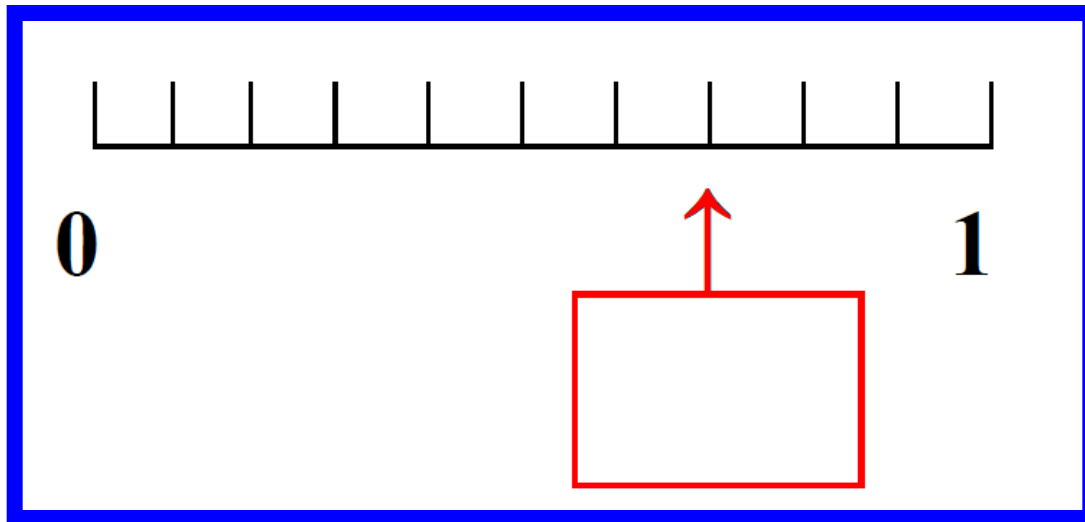
Write the correct sign/symbol, greater than or less than, in the empty box.

2165

3150

Question 9

On your sheet is a scale.
Write the number shown by
the arrow.



Question 10

Double 24.

10 second response

Question 11

David had 64p. He bought sweets costing 19p. How much did he have left?

Question 12

Sarah left school at 3:30pm and got home 40 minutes later. What time did she get home?

Question 13

Mum bought 4 cola drinks at 60p each.
How much did she spend?

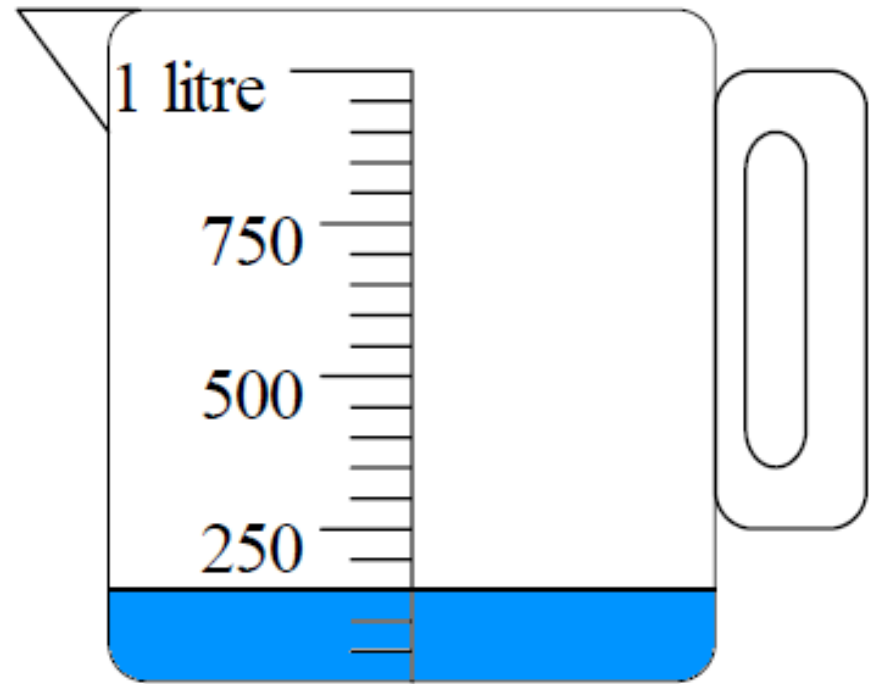
Question 14

Write the next number
in the sequence on
your sheet.

-11 -8 -5 -2

Question 15

How much liquid is in the jug on your sheet?



5 Second Answers

1. Write the number 7081. (7081)
2. What is the total of 8, 9 and 12? (29)
3. How many less than 77 is 36? (41)
4. Make the smallest number you can from 1, 5, 3, 8 (1358)
5. Round 547ml to the nearest 100 millilitres. (500ml)
6. What is the product of 9 and 7? (63)
7. What is 130 divided by 10? (13)
8. Write the correct sign/symbol, greater than or less than, in the empty box.

$$2165 \quad \boxed{<} \quad 3150.$$

9. On your sheet is a scale. Write the number shown by the arrow.



(7/10 or 0.7)

10. Double 24. (48)

10 Second Answers

11. David had 64p. He bought sweets costing 19p. How much did he have left? (45p)
12. Sarah left school at 3:30pm and got home 40 minutes later. What time did she get home? (4:10pm)
13. Mum bought 4 cola drinks at 60p each. How much did she spend? (£2.40)
14. Write the next number in the sequence on your sheet.
-11, -8, -5, -2,
15. How much liquid is in the jug on your sheet? (150ml)

Hand Out

Name: _____

Date: _____

1

--

2

	8 9 12
--	-----------

3

	36
--	----

4

	1 5 3 8
--	------------

5

	547ml
--	-------

6

--

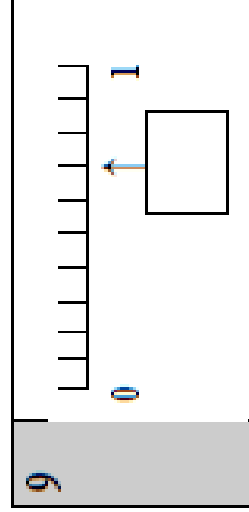
7

	130
--	-----

8

	2165	3150
--	------	------

9



10

--

11

	p	19p 64p
--	---	------------

12

	3.30pm 40 mins
--	-------------------

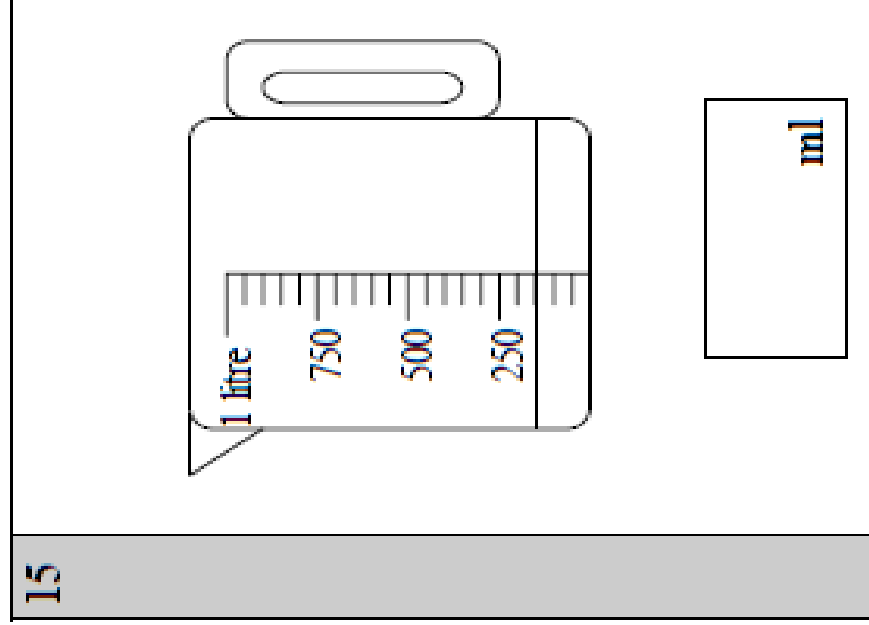
13

	£	60p
--	---	-----

14

	-11 -8 -5 -2	<table border="1" style="width: 40px; height: 40px; margin: auto;"> <tr> <td style="width: 100%; height: 100%;"></td> </tr> </table>	

15



References and additional resources.

The questions and ideas for this PowerPoint came from:
Wigan LEA Numeracy Centre
Year 4 Mental Arithmetic Tests

Thank You

PowerPoint template published by www.ksosoft.com

All the planning for this unit can be found at:
<http://www.wiganschoolsonline.net/curriculum/maths/assess.shtm>

Contains public sector information licensed under the Open Government Licence v3.0.
(<http://www.nationalarchives.gov.uk/doc/open-government-licence/version/3/>)

All images used in this PowerPoint was found at the free Public Domain Clip Art site. (<https://openclipart.org/>)
<http://www.clker.com> or were included in the original document.