

Year 4
Mental Maths
Test 3 Week 6



Term 2

Instructions

- Test 4 (end of week 6)
- Listen carefully to each question. I will read each question twice before you write your answer

5 second response

Question 1

Write the number:

Five thousand three
hundred and four .

Question 2

What is the total of

3, 7 and 2?

Question 3

What is 48 less than 95?

Question 4

Write the even number
before 587.

587

Question 5

Round 983m to the
nearest 10 metres.

Question 6

What number multiplied
by itself gives 36?

Question 7

Divide 45 by 5.

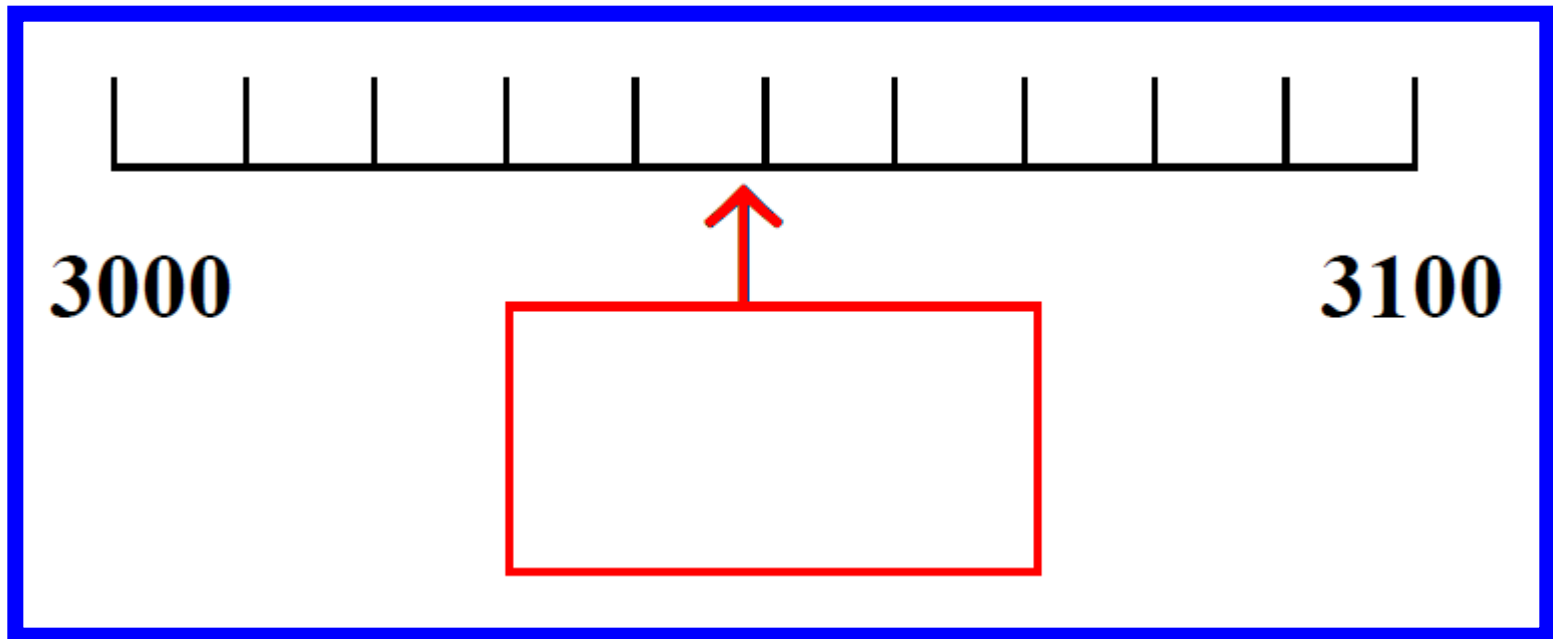
Question 8

Write the correct symbol/sign, greater than or less than in the empty box.

161	<input type="text"/>	234
------------	----------------------	------------

Question 9

On your answer sheet is a scale. What is the number shown by the arrow?



Question 10

Double 24.

10 second response

Question 11

Look at the sequence of numbers on your sheet. Write the missing number in the empty box.

741

746

756

Question 12

Pat buys a drink for 35p and a bar of chocolate for 20p. How much change does she get from £1?

Question 13

How many
sides has
a tin of
peas?



Question 14

Estimate the weight of a banana. Circle the most appropriate weight on your answer sheet.

2g

20g

200g

2kg

Question 15

Circle the numbers in the box which are multiples of 3.

99

17

27

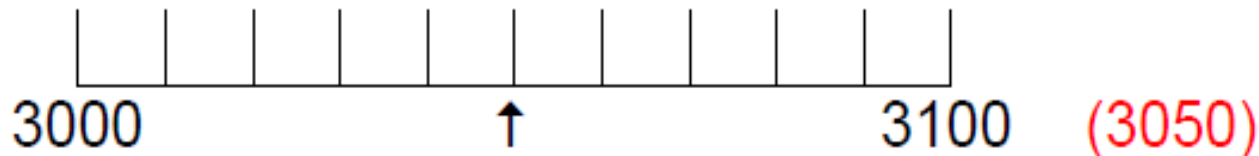
32

5 Second Answers

1. Write the number 5304. (5304)
2. What is the total of 3, 7 and 2? (12)
3. What is 48 less than 95? (47)
4. Write the even number before 587. (586)
5. Round 983m to the nearest 10 metres. (980m)
6. What number multiplied by itself gives 36? (6)
7. Divide 45 by 5. (9)
8. Write the correct symbol/sign, greater than or less than in the

empty box. 161 234.

9. On your answer sheet is a scale. What is the number shown by the arrow?



10. Double 24. (48)

10 Second Answers

11. Look at the sequence of numbers on your sheet. Write the missing number in the empty box.

741 746 756

12. Pat buys a drink for 35p and a bar of chocolate for 20p. How much change does she get from £1? (45p)
13. How many sides has a tin of peas? (3)
14. Estimate the weight of a banana. Circle the most appropriate weight on your answer sheet.

2g, 20g, 200g, 2kg

15. Circle the numbers in the box which are multiples of 3.

99 17 27 32

Name:

Date:

1

--

2

	3 7 2
--	----------

3

	48
--	----

4

	<input style="width: 40px; height: 30px;" type="text"/> 587
--	---

5

	983m
--	------

6

	36
--	----

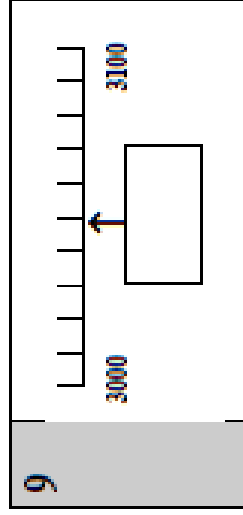
7

	45
--	----

8

	<input style="width: 40px; height: 30px;" type="text"/> 234
--	---

9



10

--

11

	741 746	<input style="width: 40px; height: 30px;" type="text"/>	756
--	---------	---	-----

12

		35p	20p	£1
--	--	-----	-----	----

13

			sides
--	--	--	-------

14

	2g	20g	200g	2kg
--	----	-----	------	-----

15

	99	17	27	32
--	----	----	----	----

Hand Out - Test 3 Week 6

References and additional resources.

The questions and ideas for this PowerPoint came from:
Wigan LEA Numeracy Centre
Year 4 Mental Arithmetic Tests

Thank You

PowerPoint template published by www.ksosoft.com

All the planning for this unit can be found at:
<http://www.wiganschoolsonline.net/curriculum/maths/assess.shtm>

Contains public sector information licensed under the Open Government Licence v3.0.
(<http://www.nationalarchives.gov.uk/doc/open-government-licence/version/3/>)

All images used in this PowerPoint was found at the free Public Domain Clip Art site. (<https://openclipart.org/>)
<http://www.clker.com> or were included in the original document.