

Year 3
Mental Maths
Test 3 Week 6



Term 2

Instructions

- Test 3 (end of week 6)
- Listen carefully to each question. I will read each question twice before you write your answer

5 second response

Question 1

What number is 10 less than one hundred and seventy eight?

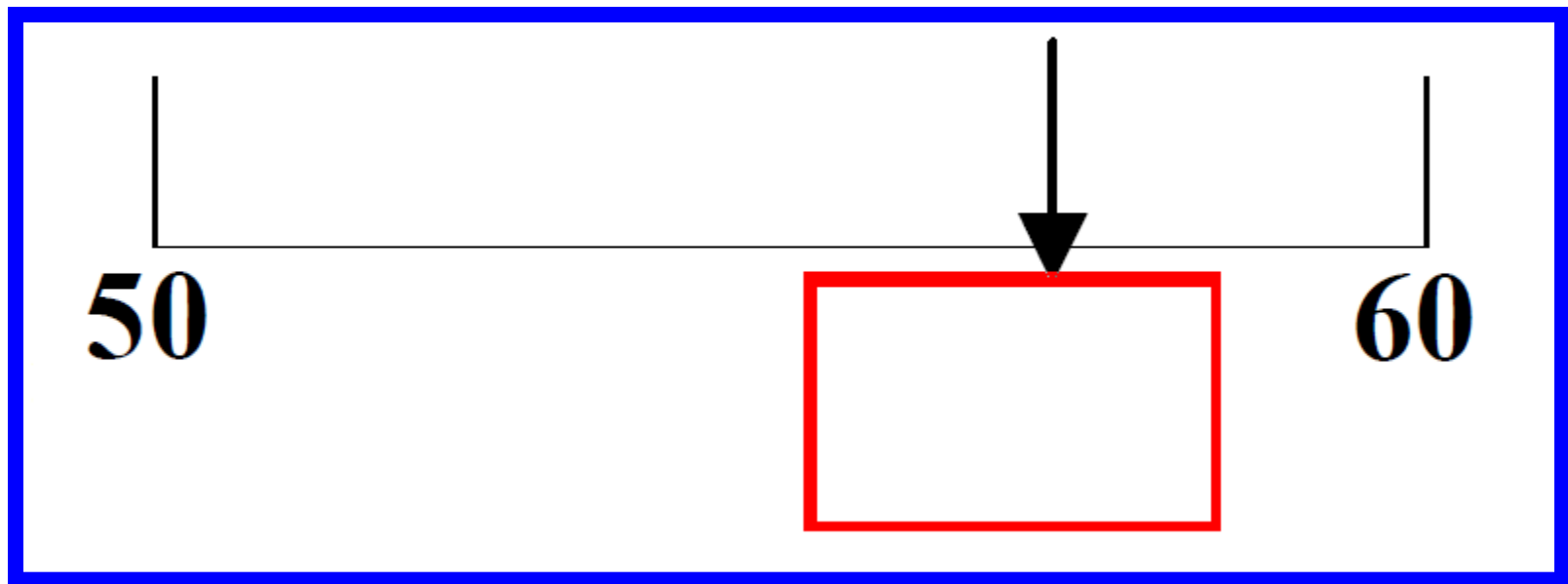
Question 2

Write the missing number.

$$364 = \square + 60 + 4$$

Question 3

Estimate the whole number shown by the arrow.



Question 4

Round 67 to the
nearest 10.

Question 5

How many sides does
a quadrilateral have?

Question 6

What is the total of
55 and 16?

Question 7

Sue had 10 stamps.
Tim has 3 stamps for
every one of Sue's.
How many stamps
has Tim?

Question 8

How many grams is
 $\frac{1}{2}$ kg?

Question 9

How many grams
equal 3.5 kg?

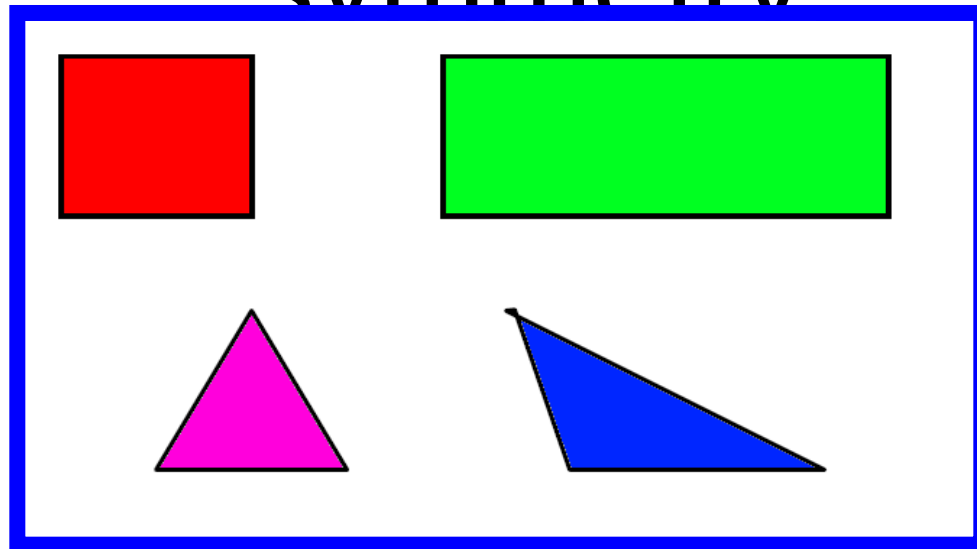
Question 10

Tim buys a comic for 50 pence. He pays with a £5 note. How much change should he get?

10 second response

Question 11

On your sheet are some shapes. Put a tick on the shape that has 3 lines of symmetry



Question 12

A Magazine costs
£1.45. What do two
magazines cost?

Question 13

What is the next number
in the sequence?

42

36

30

24

Question 14

If today is Friday,
what day will it be in
8 days time?

Question 15

There were 25 people on a train. 10 got off and 7 got on. How many people were then on the train?

5 Second Answers

1. What number is 10 less than one hundred and seventy eight? **(168)**

2. Write the missing number $364 = ? + 60 + 4$ **(300)**

3. Estimate the whole number shown by the arrow

$\underline{\hspace{2cm}} ? \underline{\hspace{2cm}}$ **(56 or 57)**

50 60

4. Round 67 to the nearest 10. **(70)**

5. How many sides does a quadrilateral have? **(4)**

6. What is the total of 55 and 16? **(71)**

7. Sue had 10 stamps. Tim has 3 stamps for every one of Sue's. How many stamps has Tim? **(30)**

8. How many grams is $\frac{1}{2}$ kg? **(500g)**

9. How many grams equal 3.5 kg? **(3500g)**

10. Tim buys a comic for 50 pence. He pays with a £5 note. How much change should he get? **(£4.50)**

10 Second Answers

11. On your sheet are some shapes. Put a tick on the shape that has 3 lines of symmetry. **(the triangle)**

12. A Magazine costs £1.45. What do two magazines cost? **(£2.90)**

13. What is the next number in the sequence?

42, 36, 30, 24, ? **(18)**

14. If today is Friday, what day will it be in 8 days time?

(Saturday)

15. There were 25 people on a train. 10 got off and 7 got on. How many people were then on the train? **(22)**

YEAR 3 Mental Arithmetic Test 9

Hand Out - Test 3 Week 6

Name:

Date:

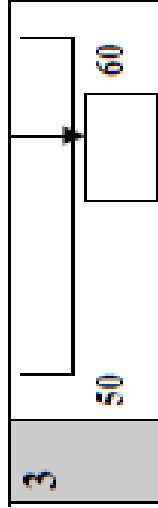
1

--

2

$$364 = \square + 60 + 4$$

3



4

--

5

--

6

	55	16
--	----	----

7

Sue has 10 stamps

8

$\frac{1}{2}$ kg
g

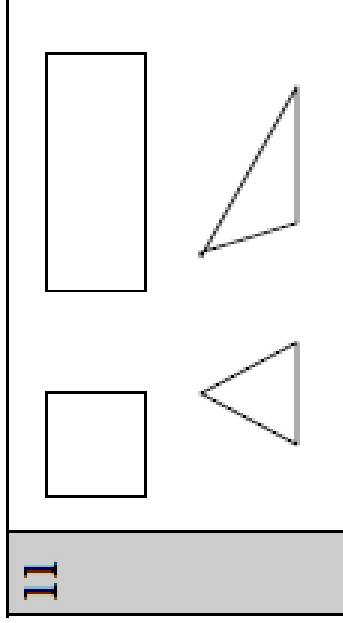
9

3.5kg
g

10

£
50p comic
£5

11



12

£1.45

13

42 36 30 24

14

Friday
8 days

15

25 people
10 got off
7 got on

References and additional resources.

The questions and ideas for this PowerPoint came from:
Wigan LEA Numeracy Centre
Year 3 Mental Arithmetic Tests

Thank You

PowerPoint template published by www.ksosoft.com

All the planning for this unit can be found at:
<http://www.wiganschoolsonline.net/curriculum/maths/assess.shtm>

Contains public sector information licensed under the Open Government Licence v3.0.
(<http://www.nationalarchives.gov.uk/doc/open-government-licence/version/3/>)

All images used in this PowerPoint was found at the free Public Domain Clip Art site. (<https://openclipart.org/>)
<http://www.clker.com> or were included in the original document.