

Year 3
Mental Maths
Test 6 Week 12



Term 1

Instructions

- Test 6 (end of week 12)
- Listen carefully to each question. I will read each question twice before you write your answer

5 second response

Question 1

Write in figures the
number seven
hundred.

Question 2

Write a number that is more than 28 and less than 31.

Question 3

My cake cost between 90p and £1. Write down what it could have cost.

Question 4

What is 37 rounded to the nearest 10?

Question 5

How many lines of symmetry has the rectangle on your sheet?

Question 6

What is the sum of 3, 6
and 7?

Question 7

What is half of 170?

Question 8


What is 9 multiplied by
3?

Question 9

Sue got on the bus at 9 o'clock.
The journey took half an hour.
What time did she get off the
bus?

Question 10

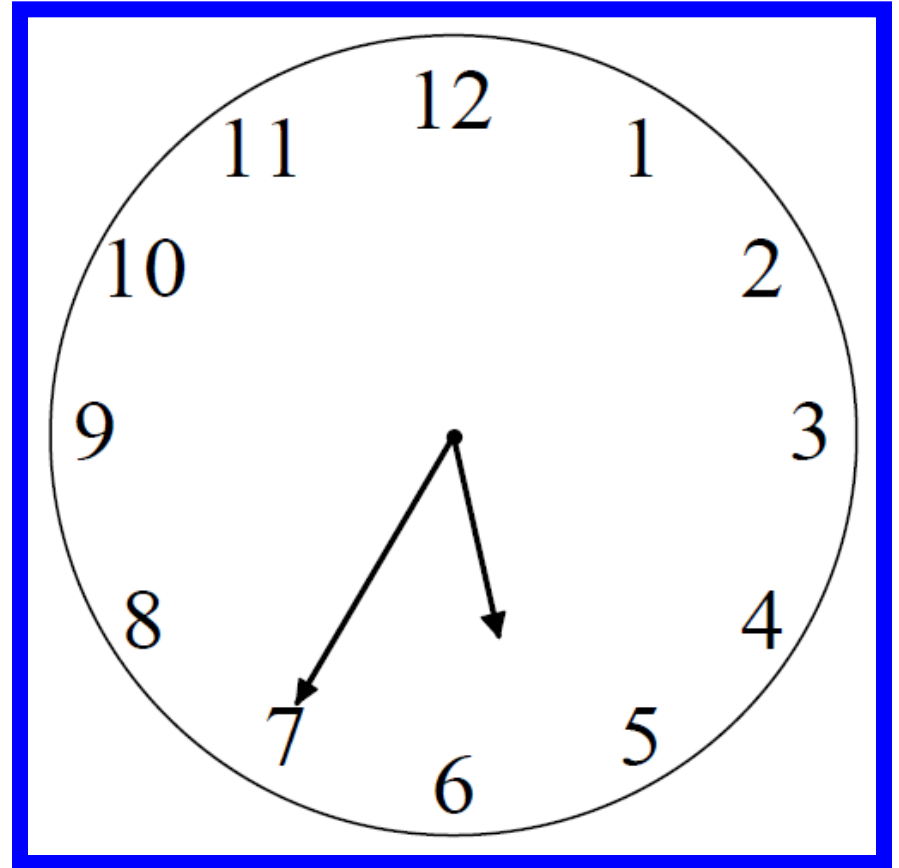
What fraction of the shape is shaded?



10 second response


Question 11

A television programme lasted 25 minutes. It started at twenty five to six. What time did it finish?



Question 12

What is the solid shape
on your sheet called?



Question 13

What are two 10p and
ten 5p coins
altogether?

2 10p coins

10 5p coins

Question 14

In 3 hours it will be
midday. What time is it
now?

Question 15

1.5m is the same as how many centimetres? Circle the correct answer.

15cm

105cm

150cm

1500cm

5 Second Answers

1. Write in figures the number seven hundred. **(700)**
2. Write a number that is more than 28 and less than 31.
(29 or 30)
3. My cake cost between 90p and £1. Write down what it could have cost. **(91p-99p inc. Accept £ notation)**
4. What is 37 rounded to the nearest 10? **(40)**
5. How many lines of symmetry has the rectangle on your sheet? **(2)**
6. What is the sum of 3, 6 and 7? **(16)**
7. What is half of 170? **(85)**
8. What is 9 multiplied by 3? **(27)**
9. Sue got on the bus at 9 o'clock. The journey took half an hour. What time did she get off the bus? **(9.30 or half past 9)**
10. What fraction of the shape is shaded? **($\frac{1}{4}$)**

10 Second Answers

11. A television programme lasted 25 minutes. It started at twenty five to six. What time did it finish? **(6 o'clock)**

12. What is the solid shape on your sheet called? **(cone)**

13. What are two 10p and ten 5p coins altogether? **(70p)**

14. In 3 hours it will be midday. What time is it now? **(9am, 9.00 or 9 in the morning)**


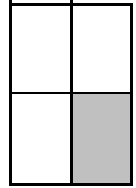
15. 1.5m is the same as how many centimetres? Circle the correct answer.


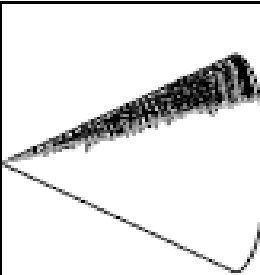
15cm 105cm 150cm 1500cm

YEAR 3 Mental Arithmetic Test 6

Name:

Date:

1	
2	28 31
3	90p £1
4	
5	
6	3 6 7
7	
8	
9	9 o'clock
10	

11		25 mins
12		
13		2 10p coins 10 5p coins
14		£
15	15cm	105cm
	150cm	1500cm

Hand Out

References and additional resources.

The questions and ideas for this PowerPoint came from:
Wigan LEA Numeracy Centre
Year 3 Mental Arithmetic Tests

Thank You

PowerPoint template published by www.ksosoft.com

All the planning for this unit can be found at:
<http://www.wiganschoolsonline.net/curriculum/maths/assess.shtm>

Contains public sector information licensed under the Open Government Licence v3.0.
(<http://www.nationalarchives.gov.uk/doc/open-government-licence/version/3/>)

All images used in this PowerPoint was found at the free Public Domain Clip Art site. (<https://openclipart.org/>)
<http://www.clker.com> or were included in the original document.