

Year 3
Mental Maths
Test 2 Week 4



Term 1

Instructions

- Test 2 (end of week 4)
- Listen carefully to each question. I will read each question twice before you write your answer

5 second response

Question 1

1. What number is shown by the arrow on the number line.



Question 2

On your sheet is part of a 100 square. Fill in the missing number.

15	
	26

Question 3

Write a number between
17 and 21.

Question 4

Round 16 to the
nearest 10.

Question 5

How many right angles
are there in a square?

Question 6

Four plus six.

Question 7

Take six from eighteen.

Question 8

Double 16.

Question 9

Share 18 sweets
between 2 children.

Question 10

How many pence in
£1.50?

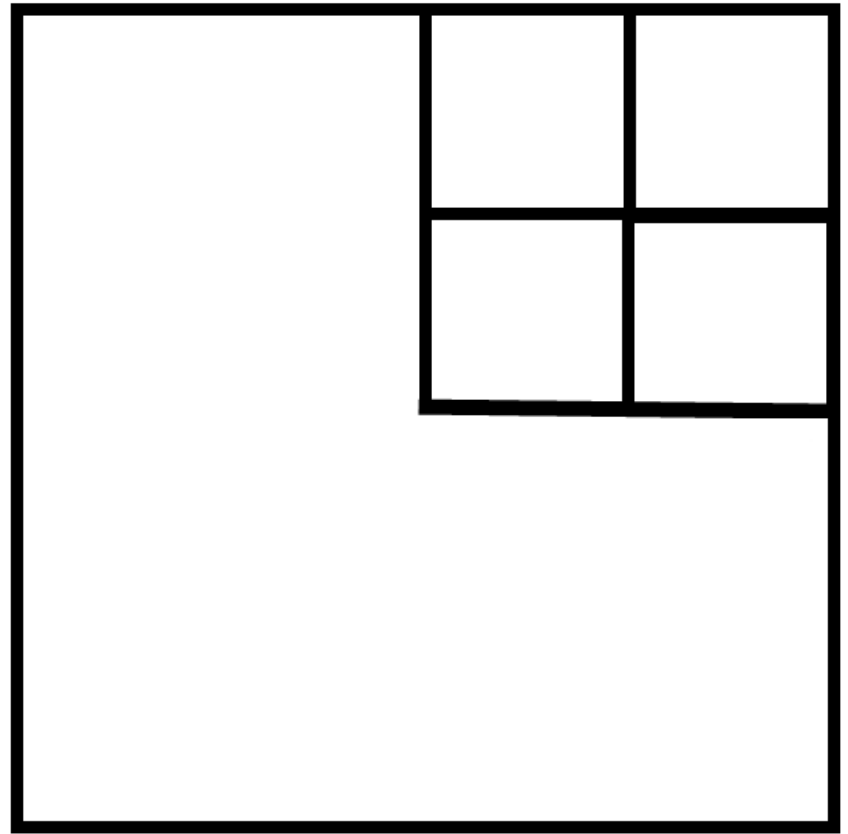
10 second response

Question 11

A pear costs 15p more than an apple. An apple costs 12p. What does a pear cost?

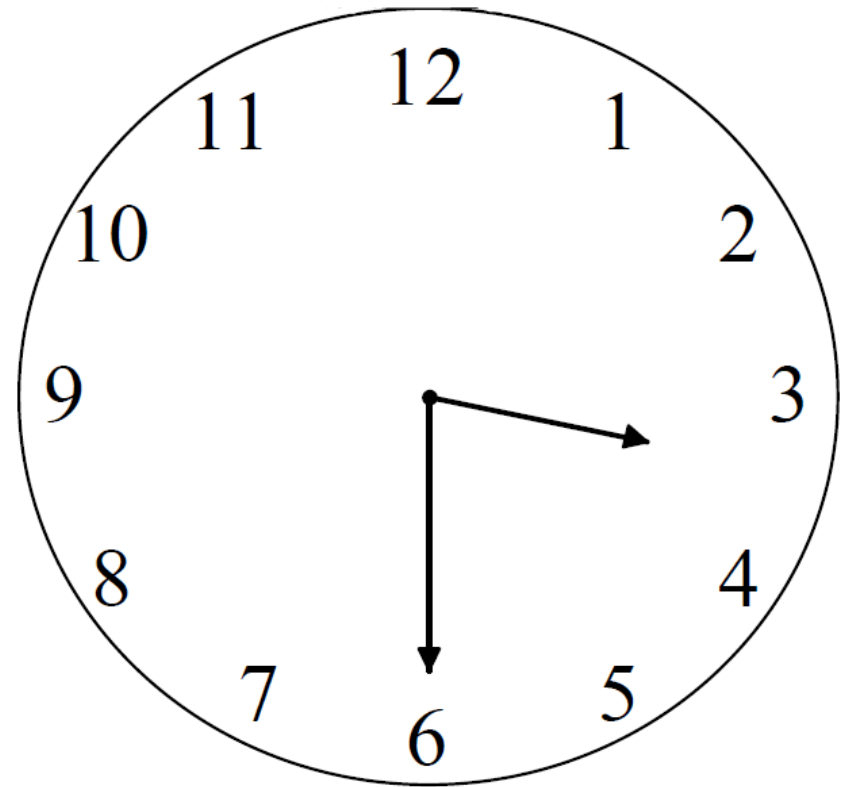
Question 12

How many squares can you count on the diagram on your sheet?



Question 13

On your
sheet is a
clock.
What time
does it
show?




Question 14

What is double the sum
of 18 and 12?

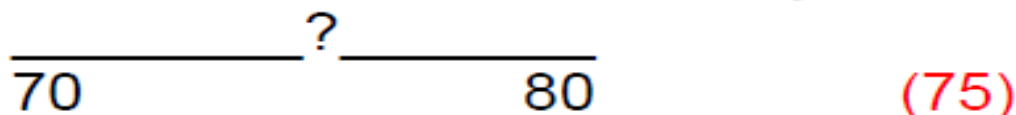
Question 15

Draw the next shape in the sequence.



5 Second Answers

1. What number is shown by the arrow on the number line.



2. On your sheet is part of a 100 square. Fill in the missing number.

15	
25	26

3. Write a number between 17 and 21. (18, 19 or 20)

4. Round 16 to the nearest 10. (20)

5. How many right angles are there in a square? (4)

6. Four plus six. (10)


7. Take six from eighteen. (12)

8. Double 16. (32)

9. Share 18 sweets between 2 children. (9)

10. How many pence in £1.50? (150)

10 Second Answers

11. A pear costs 15p more than an apple. An apple costs 12p. What does a pear cost? (27)
12. How many squares can you count on the diagram on your sheet? (6)
13. On your sheet is a clock. What time does it show? (3.30 or half past 3)
14. What is double the sum of 18 and 12? (60)
15. Draw the next shape in the sequence. ()

References and additional resources.

The questions and ideas for this PowerPoint came from:
Wigan LEA Numeracy Centre
Year 3 Mental Arithmetic Tests

Thank You

PowerPoint template published by www.ksosoft.com

All the planning for this unit can be found at:
<http://www.wiganschoolsonline.net/curriculum/maths/assess.shtm>

Contains public sector information licensed under the Open Government Licence v3.0.
(<http://www.nationalarchives.gov.uk/doc/open-government-licence/version/3/>)

All images used in this PowerPoint was found at the free Public Domain Clip Art site. (<https://openclipart.org/>)
<http://www.clker.com> or were included in the original document.