

Year 2
Mental Maths
Test 5 Week 10



Term 3

Instructions

- Test 5 (end of week 10)
- Listen carefully to each question. I will read each question twice before you write your answer

10 second response


Question 1

**Write number 54 in
words**

Question 2

$$13 + 24$$

13 + 24 is



Question 3


What is the difference
between 83 and 78.

Question 4

$$400 + 300.$$

Question 5

Two oranges cost 80p.
What does 1 orange
cost?



Question 6

What is the sum of the number of seconds in a minute and the number of days in a week?

Question 7

Draw a 2D shape in the box that has 4 equal sides.

Question 8

Fill in the missing sign
to make the sum
correct.

$$34 \quad \square \quad 8 = 42$$

Question 9

Divide 40 by 2.

Question 10

Two times what
number is 16?

$$2 \times \square = 16$$


15 second response

Question 11

Ribbon costs £1 for a metre. How much is one and a half metres?

Question 12

The sum of two numbers is 17. One is 9. What is the other?



and 9 is 17

Question 13

How many legs on 3
chairs?



Question 14

Sally is 7 years old today. How old was she 3 years ago?

Question 15

Beth buys 3 pizzas. She cuts them into quarters. How many pieces did she have?



10 Second Answers




1. Write number 54 in words (**fifty four**)
2. $13 + 24$ (**37**)
3. What is the difference between 83 and 78 (**5**)
4. $400 + 300$ (**700**)
5. Two oranges cost 80p. What does 1 orange cost? (**40p**)
6. What is the sum of the number of seconds in a minute and the number of days in a week? (**67**)
7. Draw a 2D shape in the box that has 4 equal sides (**square**)
8. Fill in the missing sign to make the sum correct (**+**)
9. Divide 40 by 2 (**20**)
10. Two times what number is 16? (**8**)

15 Second Answers

11. Ribbon costs £1 for a metre. How much is one and a half metres? (**£1.50**)
12. The sum of two numbers is 17. One is 9. What is the other? (**8**)
13. How many legs on 3 chairs? (**12**)
14. Sally is 7 years old today. How old was she 3 years ago? (**4**)
15. Beth buys 3 pizzas. She cuts them into quarters. How many pieces did she have? (**12**)

Year 2 Block 3
Test 5 Answer Sheet

Hand Out

Name: _____		Date: _____	
1	<input type="text"/>	9	<input type="text"/>
2	$13 + 24$ is <input type="text"/>	10	$2 \times \text{} = 16$
3	$83 - 78$ <input type="text"/>	11	<u> </u> 1 metre = £1 <input type="text"/> £
4	<input type="text"/>	12	<input type="text"/> and 9 is 17
5	 2 cost 80p 1 orange costs <input type="text"/> p	13	 <input type="text"/> legs
6	Seconds in a minute <input type="text"/> Days in a week <input type="text"/>	14	<input type="text"/> years old
7		15	 <input type="text"/> pieces
8	$34 - \text{} = 42$		

References and additional resources.

The questions and ideas for this PowerPoint came from:
Wigan LEA Numeracy Centre
Year 2 Mental Arithmetic Tests

Thank You

PowerPoint template published by www.ksosoft.com

All the planning for this unit can be found at:
<http://www.wiganschoolsonline.net/curriculum/maths/assess.shtm>

Contains public sector information licensed under the Open Government Licence v3.0.
(<http://www.nationalarchives.gov.uk/doc/open-government-licence/version/3/>)

All images used in this PowerPoint was found at the free Public Domain Clip Art site. (<https://openclipart.org/>)
<http://www.clker.com> or were included in the original document.