

Year 2
Mental Maths
Test 3 Week 6



Term 3

Instructions

- Test 3 (end of week 6)
- Listen carefully to each question. I will read each question twice before you write your answer

10 second response

Question 1

Total the amounts on
your sheet.

£1

50p

5p

2p

Question 2

$$9 \times 10.$$

Question 3

30 divided by 3.

Question 4

16 plus 15.

Question 5


Double the number in
the box.



45

Question 6

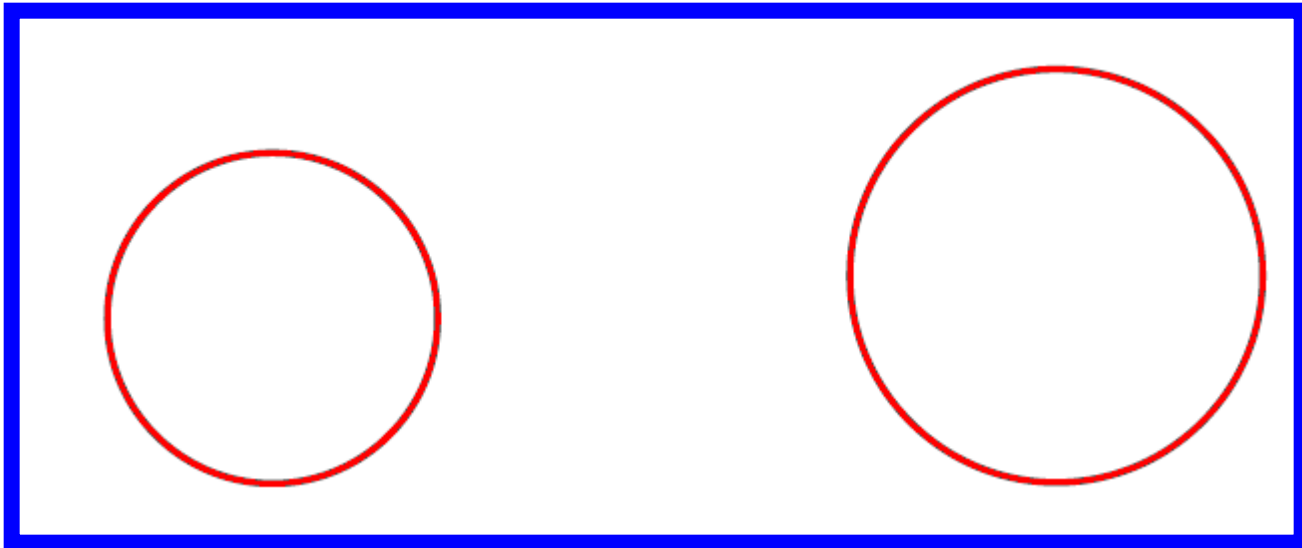
Fill in the missing number.



$$+ 40 = 100$$

Question 7

Carl buys a toy car for 12p. He pays using 2 coins. Draw the coins.



Question 8

Pantomime tickets cost £5 each. How much will 6 tickets cost?

Question 9

Which is *lighter* 36g or
56g?

Question 10

Draw a shape in the box that has 3 sides and 3 corners.



15 second response

Question 11

List the multiples of 5
between 66 and 89.

66

89

Question 12

The school clock shows the time as 2 o'clock. School ends in one and a half hours. What time does school end?

School closes at

:

Question 13

Gemma's skipping rope measures $1\frac{1}{2}$ metres. Emma's rope measures $2\frac{1}{2}$ metres. What is the total length of their ropes?

$2\frac{1}{2}$ m.

$1\frac{1}{2}$ m.

Question 14

Billy scores 11, 7 and 9
on the dart board.
What is his total
score?

Question 15

If there are 7 days in one week, how many are there in a fortnight.

10 Second Answers

1. Total the amounts on your sheet (**£1.57**)
2. 9×10 (**90**)
3. 30 divided by 3 (**10**)
4. 16 plus 15 (**31**)
5. Double the number in the box (**90**)
6. Fill in the missing number (**60**)
7. Carl buys a toy car for 12p. He pays using 2 coins. Draw the coins. (**10p and 2p**)
8. Pantomime tickets cost £5 each. How much will 6 tickets cost? (**£30**)
9. Which is lighter 36g or 56g? (**36g**)
10. Draw a shape in the box that has 3 sides and 3 corners (**triangle**)


15 Second Answers

11. List the multiples of 5 between 66 and 89 **(70,75,80,85)**
12. The school clock shows the time as 2 o'clock. School ends in one and a half hours. What time does school end? **(3:30)**
13. Gemma's skipping rope measures $1\frac{1}{2}$ metres. Emma's rope measures $2\frac{1}{2}$ metres. What is the total length of their ropes? **(4 metres)**
14. Billy scores 11, 7 and 9 on the dart board. What is his total score? **(27)**
15. If there are 7 days in one week, how many are there in a fortnight **(14)**

Year 2 Block 3 Test 3 Answer Sheet

Hand Out

Name: _____ **Date:** _____

1	£1 50p 5p 2p	£ .	9	<input type="text"/> g
2		<input type="text"/>	10	
3		<input type="text"/>	11	$\frac{66}{89}$ <input type="text"/> <input type="text"/> <input type="text"/> <input type="text"/> <input type="text"/>
4	16,15	<input type="text"/>	12	<input type="text"/> : <input type="text"/> : <input type="text"/> School closes at
5	<input type="text"/> 45	<input type="text"/>	13	$\frac{2 \frac{1}{2} \text{ m.}}{1 \frac{1}{2} \text{ m.}}$ The total length is <input type="text"/> m
6	<input type="text"/> + 40 = 100		14	1179 Total score <input type="text"/>
7	 12p <input type="text"/> <input type="text"/>	<input type="text"/>	15	<input type="text"/> days
8	£5 ticket	<input type="text"/> £		
	6 tickets cost	<input type="text"/>		

References and additional resources.

The questions and ideas for this PowerPoint came from:
Wigan LEA Numeracy Centre
Year 2 Mental Arithmetic Tests

Thank You

PowerPoint template published by www.ksosoft.com

All the planning for this unit can be found at:
<http://www.wiganschoolsonline.net/curriculum/maths/assess.shtm>

Contains public sector information licensed under the Open Government Licence v3.0.
(<http://www.nationalarchives.gov.uk/doc/open-government-licence/version/3/>)

All images used in this PowerPoint was found at the free Public Domain Clip Art site. (<https://openclipart.org/>)
<http://www.clker.com> or were included in the original document.