

Year 2  
Mental Maths  
Test 1 Week 2



**Term 3**

# Instructions

- Test 1 ( end of week 2)
- Listen carefully to each question. I will read each question twice before you write your answer

**10 second response**

## Question 1

Count on from 73 to 81.

How many did you  
count on?

**73 count on  is 81**

## Question 2

Start at 100 count back to 89. How many did you count back?

**100 count back  is 89**

# Question 3

52 plus 30.

## Question 4

Write the number that is  
4 tens and 9 units.

## Question 5

What is 89 to the  
nearest 10?



## Question 6

What is the 6th month  
of the year?

## Question 7

Write a number in the box  
so the 3 numbers are in  
order.

**38**

**47**

## Question 8

What number is 10  
before 88?


## Question 9

Fill in the missing numbers on the number track.

<input type="text"/>	79	<input type="text"/>	81	82
----------------------	----	----------------------	----	----

## Question 10

Look at the  
shape on  
your sheet  
. Colour  
one quarter  
of it.



**15 second response**

## Question 11

A bar of chocolate has 20 pieces. How many will a quarter have?

## Question 12

8 added to a number is 28. What is the number?



+

8

=

28



## Question 13

If a box of bananas weighs 4 kilograms.  
How much do 3 boxes weigh?

## Question 14

An ice-cream cone costs 3p. How many can I buy with 15p?

## Question 15

Sam goes into class at 9 o'clock. He plays out at a quarter past 10. How long was Sam in the classroom?

# 10 Second Answers

1. Count on from 73 to 81. How many did you count on? **(8)**
2. Start at 100 count back to 89. How many did you count back? **(11)**
3. 52 plus 30 **(82)**
4. Write the number that is 4 tens and 9 units **(49)**
5. What is 89 to the nearest 10? **(90)**
6. What is the 6th month of the year? **(June)**
7. Write a number in the box so the 3 numbers are in order **(39- 46)**
8. What number is 10 before 88? **(78)**
9. Fill in the missing numbers on the number track **(78,80)**
10. Look at the shape on your sheet . Colour one quarter of it.




# 15 Second Answers

11. A bar of chocolate has 20 pieces. How many will a quarter have? **(5)**
12. 8 added to a number is 28. What is the number? **(20)**
13. If a box of bananas weighs 4 kilograms. How much do 3 boxes weigh? **(12)**
14. An ice-cream cone costs 3p. How many can I buy with 15p? **(5)**
15. Sam goes into class at 9 o'clock. He plays out at a quarter past 10. How long was Sam in the classroom? **(1h.15min)**

# Year 2 Block 3 Test 1 Answer Sheet

# Hand Out

**Name:** \_\_\_\_\_ **Date:** \_\_\_\_\_

1	<input type="text"/> is 81 <input type="text"/>	9	<input type="text"/> 79 <input type="text"/> 81 <input type="text"/> 82
2	100 count back <input type="text"/> is 89 <input type="text"/>	10	
3	<input type="text"/>	11	1 bar has 20 pieces $\frac{1}{4}$ has <input type="text"/> pieces
4	<input type="text"/>	12	 + <input type="text"/> 8 = <input type="text"/> 28
5	<input type="text"/>	13	<input type="text"/> 4kg 3 boxes weigh <input type="text"/> kg
6	<input type="text"/>	14	 3p. I can buy <input type="text"/> ice-creams for 15p
7	38 <input type="text"/> 47 <input type="text"/>	15	Class at 5:00 Play at 10:15 <input type="text"/> hour <input type="text"/> minutes
8	<input type="text"/>		

# References and additional resources.

The questions and ideas for this PowerPoint came from:  
Wigan LEA Numeracy Centre  
Year 2 Mental Arithmetic Tests

# *Thank You*

PowerPoint template published by [www.ksosoft.com](http://www.ksosoft.com)

All the planning for this unit can be found at:  
<http://www.wiganschoolsonline.net/curriculum/maths/assess.shtm>

Contains public sector information licensed under the Open Government Licence v3.0.  
(<http://www.nationalarchives.gov.uk/doc/open-government-licence/version/3/>)

All images used in this PowerPoint was found at the free Public Domain Clip Art site. (<https://openclipart.org/>)  
<http://www.clker.com> or were included in the original document.