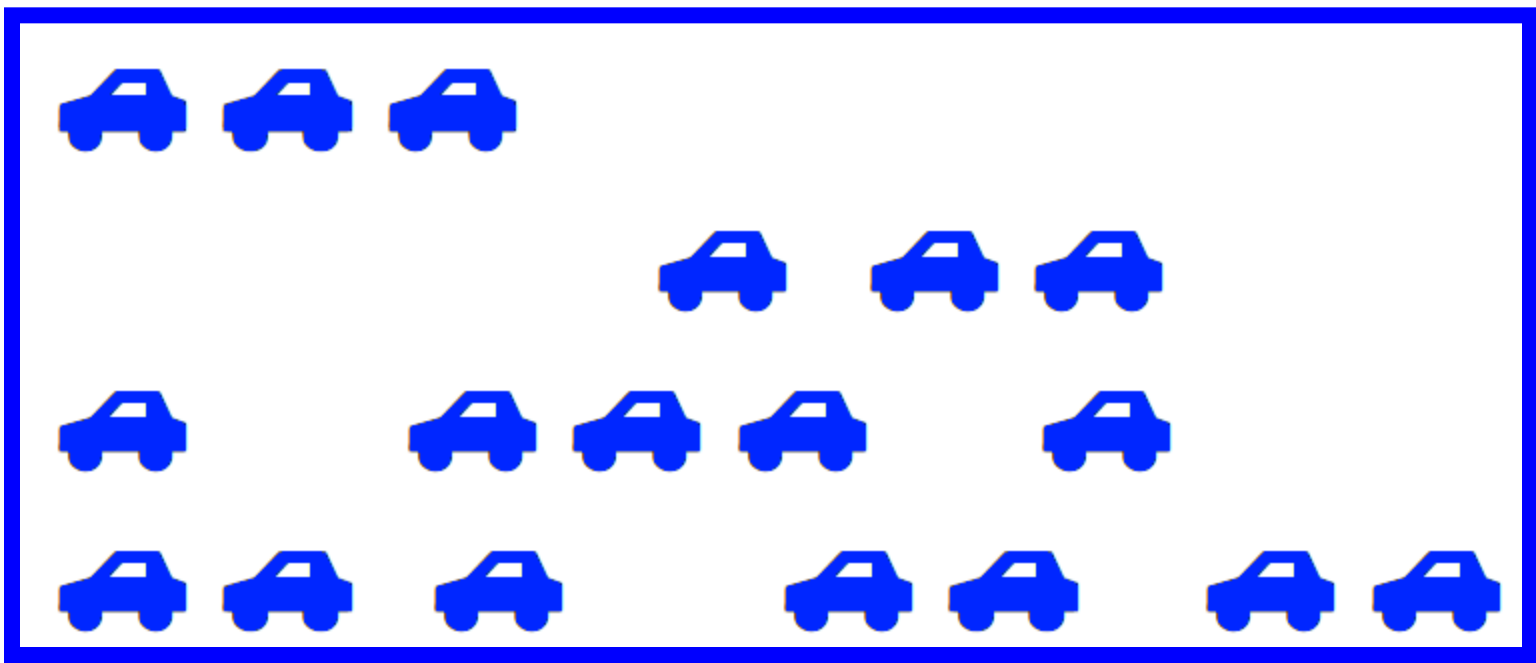


Year1
Block 3 Assessment
Paper 1
(Answers after each question)



Question 1

How many cars?




Answer

18



What is the missing number?

5 plus  makes 8




Answer

3




Question 3

Put a ✓ next to the
empty cup



Answer

Tick first cup. It is empty.



Question 4

Draw a ✓ under the table



Draw a ball next to the table

Draw a flower above the
table



Answer

Objects drawn appropriately



Question 5

I have 3 cats and 8 dogs. How many animals altogether?



Answer

11



Question 6

Jenny has 12p, Joe has 7p. How much do they have altogether?

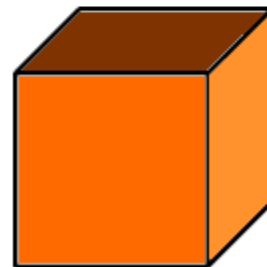


Answer

19p

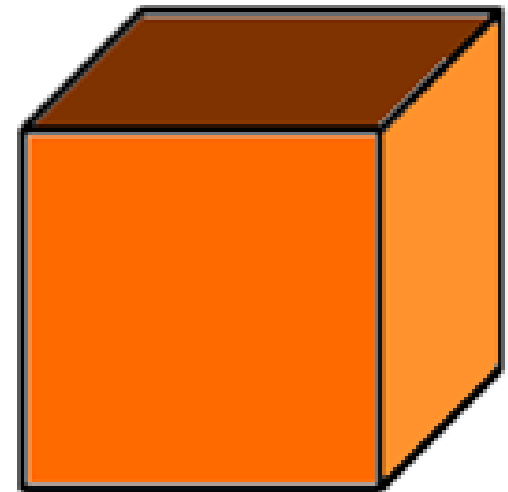



Tick the shapes with 6 faces



Answer


Cube and cuboid



Put a **X** on the 17th
tractor



Answer



Put a ring around the
even numbers

1 4 7 8 10 13 16



Answer

4, 8, 10, 16

1 4 7 8 10 13 16



Write the missing numbers

14	15			18			21			24
----	----	--	--	----	--	--	----	--	--	----



Answer

16, 17, 19, 20, 22, 23



How many tens are
there in **69**?



Answer

6



Question 12

Put a ring around the tens digit in these numbers.

18

36

57

94



Answer

1, 3, 5, 9 circle

18

36

57

94



What is the total of the
units in these
numbers?

23

44

11

86



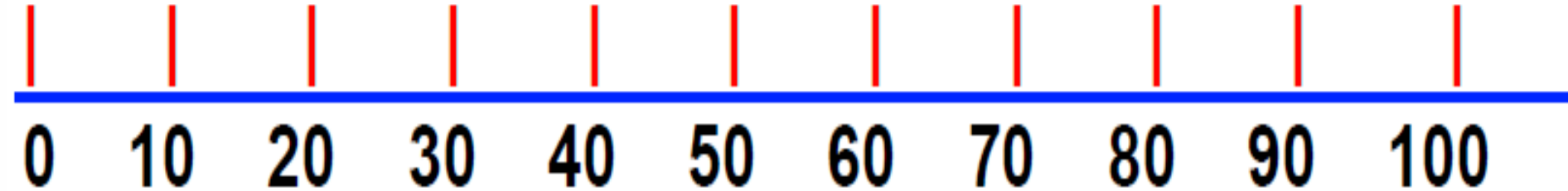
Answer

$$3 + 4 + 1 + 6 = 14$$



Question 14

Start at 40. Count on 30.
What number do you
land on?



Answer

70



Question 15

Pam had 17 marbles. Her friend gave her 10 more. How many marbles does she have altogether?



Answer

27



Answer

Question	Answer	Level	Comments
1	18	1a	1 mark
2	3	2c	1 mark
3	Tick first cup	1b	1 mark
4	Objects drawn appropriately	1b	1 for 2 correct 2 for all
5	11	1a	1 mark
6	19	2c	1 mark
7	Cube and cuboid	2c	1 mark
8	X on 17 th tractor	2c	1 mark
9	4, 8, 10, 16	2c	1 mark
10	16,17,19,20,22,23	2b	1 mark
11	6	2a	1 mark
12	1, 3, 5, 9 circled	2a	1 mark
13	14	2a	2 marks
14	70	2a	1 mark
15	27	2b	1 mark

Draft Level Thresholds Y1 Block 3

Below level 1c	Level 1		Level 2		
0 - 4	5 - 15		16 - 34		
	1b	1a	2c	2b	2a
	5-9	10-15	16-23	24-29	30-34



Student's Test Paper

If you would like a copy of the student test paper to print out, please click here.

[Student Test Paper Year 1 Block 3.](#)



References and additional resources.

The questions and ideas for this PowerPoint came from:
Wigan LEA Numeracy Centre
Year1 Block 1 Assessment

Thank You

PowerPoint template published by www.ksosoft.com

All the planning for this unit can be found at:
<http://www.wiganschoolsonline.net/curriculum/math/assess.shtm>

Contains public sector information licensed under the Open Government Licence v3.0.
(<http://www.nationalarchives.gov.uk/doc/open-government-licence/version/3/>)

All images used in this PowerPoint was found at the free Public Domain Clip Art site. (<https://openclipart.org/>)
<http://www.clker.com> or were included in the original document.



Where Can I Find More Resources Like This?

- You can now visit my teaching resource website at <http://www.DrFog.co.uk>
- You can [click here](#) to search for more of my teaching resources.
- [Click here](#) to visit my TES shop!

