



Year 1
Mental Maths
Test 6 Week 12



Term 3

Instructions


- Test 6 (end of week 12)
- Listen carefully to each question.
- I will read each question twice before you write your answer

10 Second Response

Question 1

A book is 2 hand spans wide. A table is 7 hand spans wide.

How much wider is the table than the book?



Question 2

It takes 5 cups of water to fill a bowl. How many cups to fill 3 bowls?

Question 3

A cat weighs 20 cubes.
How much do 2 cats
weigh?



20 cubes.

Question 4

How long is it from 3 o'clock to 6 o'clock?

Question 5

Look at your sheet. Fill
in the missing day.

Sunday Monday Tuesday

Wednesday_____

Friday Saturday

Question 6

If there are 7 days in one week. How many days in 2 weeks?

Question 7

A door measures 12 hand spans.
The cupboard is **half** this
size. What does it measure?



12 handspans

Question 8

10 bricks balance an apple. 9 bricks balance a pear. How many bricks will balance an apple and a pear together?



10 bricks



9 bricks

Question 9

16 count on 5.

Question 10

Write 2 ways to make 10.

$$\square + \square = 10$$

$$\square + \square = 10$$

Answers

1. A book is 2 hand spans wide. A table is 7 hand spans wide. How much wider is the table than the book? **(5 handspans)**
2. It takes 5 cups of water to fill a bowl. How many cups to fill 3 bowls? **(15)**
3. A cat weighs 20 cubes. How much do 2 cats weigh? **(40 cubes)**
4. How long is it from 3 o'clock to 6 o'clock? **(3 hours)**
5. Look at your sheet. Fill in the missing day **(Thursday)**
6. If there are 7 days in one week. How many days in 2 weeks? **(14)**
7. A door measures 12 hand spans. The cupboard is half this size. What does it measure? **(6 handspans)**
8. 10 bricks balance an apple. 9 bricks balance a pear. How many bricks will balance an apple and a pear together? **(19)**
9. 16 count on 5. **(21)**
10. Write 2 ways to make **10**







Year 1 Block 3 Test 6

Answer Sheet

Hand Out

Name:

Date:

1.	 2 handspans  7 handspans <input type="text"/> handspans	<input type="text"/> days
2.	5 cups fill 1 bowl <input type="text"/> cups	 12 handspans <input type="text"/> handspans
3.	 20 cubes 2 cats weigh <input type="text"/> cubes	 10 bricks  9 bricks <input type="text"/> altogether
4.	Start 3 o'clock Finish 6 o'clock <input type="text"/> hours	<input type="text"/>
5.	Sunday Monday Tuesday Wednesday _____ Friday Saturday	<input type="text"/> + <input type="text"/> = 10 <input type="text"/> + <input type="text"/> = 10

References and additional resources.

The questions and ideas for this PowerPoint came from:
Wigan LEA Numeracy Centre
Year1 Mental Arithmetic Tests

Thank You

PowerPoint template published by www.ksosoft.com

All the planning for this unit can be found at:
<http://www.wiganschoolsonline.net/curriculum/maths/assess.shtm>

Contains public sector information licensed under the Open Government Licence v3.0.
(<http://www.nationalarchives.gov.uk/doc/open-government-licence/version/3/>)

All images used in this PowerPoint was found at the free Public Domain Clip Art site. (<https://openclipart.org/>)
<http://www.clker.com> or were included in the original document.

Where Can I Find More Resources Like This?

- You can now visit my teaching resource website at <http://www.DrFog.co.uk>
- You can [click here](#) to search for more of my teaching resources.
- [Click here](#) to visit my **YES shop!**