

Year 1
Mental Maths
Test 4 Week 8



Term 3

Instructions

- Test 4 (end of week 8)
- Listen carefully to each question. I will read each question twice before you write your answer.
- 10 Second Response

Question 1

Which number is the same as 7 tens and 8 units.

Question 2

Write the missing

n

$$7 + \square = 10$$

Question 3

What is 10 fewer than 30? Ring the answer on your sheet


0 40 50 20 10

Question 4

What is the fourth letter
of the alphabet?

Question 5

Which number comes
half way between 20
and 30?

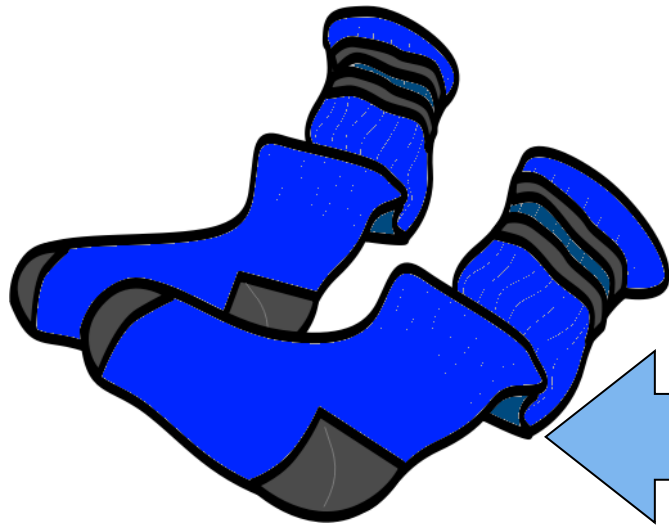


Question 6

What is 10 more than
55?

Question 7

How many socks in 4
pairs?



1 pair of socks

Question 8

20 take away 2.

Question 9

Look at your number track.
What number is missing.
Write it on the track

27	28	29		31	32	33
-----------	-----------	-----------	--	-----------	-----------	-----------

Question 10

Colour the eighth ball.










Answers

1. Which number is the same as 7 tens and 8 units. **(78)**
2. Write the missing number. **(3)**
3. What is 10 fewer than 30? Ring the answer on your sheet **(20)**
4. What is the fourth letter of the alphabet? **(D)**
5. Which number comes half way between 20 and 30? **(25)**
6. What is 10 more than 55? **(65)**
7. How many socks in 4 pairs? **(8)**
8. 20 take away 2 **(18)**
9. Look at your number track. What number is missing. Write it on the track **(30)**
10. Colour the eighth ball.

Year 1 Block 3 Test 4
Answer Sheet

Hand Out

Name: _____ Date: _____

1.		6.							
2.	$7 + \square = 10$	7.	 1 pair  socks in 4 pairs						
3.	0 40 50 20 10	8.							
4.		9.	<table border="1" data-bbox="1362 321 1439 778"> <tbody> <tr> <td>27</td> <td>28</td> <td>29</td> <td>31</td> <td>32</td> <td>33</td> </tr> </tbody> </table>	27	28	29	31	32	33
27	28	29	31	32	33				
5.	20 <u> </u> 30	10.							

References and additional resources.

The questions and ideas for this PowerPoint came from:
Wigan LEA Numeracy Centre
Year1 Mental Arithmetic Tests

Thank You

PowerPoint template published by www.ksosoft.com

All the planning for this unit can be found at:
<http://www.wiganschoolsonline.net/curriculum/maths/assess.shtm>

Contains public sector information licensed under the Open Government Licence v3.0.
(<http://www.nationalarchives.gov.uk/doc/open-government-licence/version/3/>)

All images used in this PowerPoint was found at the free Public Domain Clip Art site. (<https://openclipart.org/>)
<http://www.clker.com> or were included in the original document.

Where Can I Find More Resources Like This?

- You can now visit my teaching resource website at <http://www.DrFog.co.uk>
- You can [click here](#) to search for more of my teaching resources.
- [Click here](#) to visit my **YES shop!**