

Year 1  
Mental Maths  
Test 3 Week 6



**Term 3**

# Instructions

- Test 3 (end of week 6)
- Listen carefully to each question.
- I will read each question twice before you write your answer

# Question 1

Find the total of 6, 9  
and 1.

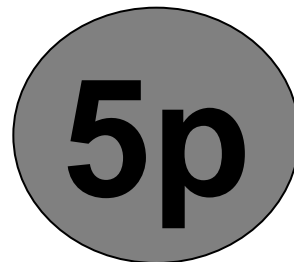
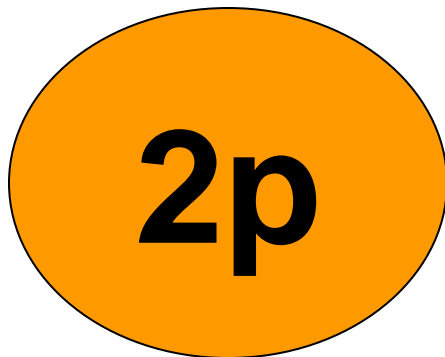
## Question 2

Look at your sheet. Put a circle around the smallest number.

<b>32</b>		<b>11</b>
	<b>13</b>	
<b>23</b>		<b>31</b>

## Question 3

I have a two pence, a five pence and a one pence piece in my purse. How much do I have?



## Question 4

My friend gave me half of 20p. How much did I get?

## Question 5

Fill in the missing number.

**17 18 19  21 22 23**

## Question 6

What do I add to 50 to make 58?

$$50 + \square = 58$$



## Question 7

What add 8 makes 18?

## Question 8

Paul has 9 balloons. Jack has 6 balloons. How many more balloons does Paul have?

Paul has **9** balloons  
Jack has **6** balloons

## Question 9

Write the number that has **8** tens and **5** units.

## Question 10

Two apples cost 16p.  
How much does 1



# Answers


## 10 Second Response

1. Find the total of 6, 9 and 1 **(16)**
2. Look at your sheet. Put a circle around the smallest number **(11)**
3. I have a two pence a five pence and a one pence piece in my purse. How much do I have? **(8p)**
4. My friend gave me half of 20p. How much did I get? **(10p)**
5. Fill in the missing number. **(20)**
6. What do I add to 50 to make 58? **(8)**
7. What add 8 makes 18? **(10)**
8. Paul has 9 balloons. Jack has 6 balloons. How many more balloons does Paul have? **(3)**
9. Write the number that has 8 tens and 5 units. **(85)**
10. Two apples cost 16p. How much does 1 cost? **(8p)**

Year 1 Block 3 Test 3  
Answer Sheet

# Hand Out

Name: \_\_\_\_\_ Date: \_\_\_\_\_

1.	6, 9, 1 <input type="text"/>	6.	$50 + \square = 58$
2.	32 13 23 11 31	7.	<input type="text"/>
3.	2p 5p 1p <input type="text"/> p	8.	Paul has 9 balloons Jack has 6 balloons <input type="text"/> more balloons Paul has
4.	<input type="text"/> p	9.	<input type="text"/>
5.	17 18 19 <input type="text"/> 21 22 23	10.	 16p <input type="text"/> p 1 apple costs

# References and additional resources.

The questions and ideas for this PowerPoint came from:  
Wigan LEA Numeracy Centre  
Year1 Mental Arithmetic Tests

# *Thank You*

PowerPoint template published by [www.ksosoft.com](http://www.ksosoft.com)

All the planning for this unit can be found at:  
<http://www.wiganschoolsonline.net/curriculum/maths/assess.shtm>

Contains public sector information licensed under the Open Government Licence v3.0.  
(<http://www.nationalarchives.gov.uk/doc/open-government-licence/version/3/>)

All images used in this PowerPoint was found at the free Public Domain Clip Art site. (<https://openclipart.org/>)  
<http://www.clker.com> or were included in the original document.

# Where Can I Find More Resources Like This?

- You can now visit my teaching resource website at <http://www.DrFog.co.uk>
- You can [click here](#) to search for more of my teaching resources.
- [Click here](#) to visit my **YES shop!**