

Year 1
Mental Maths
Test 2 Week 4



Term 3

Instructions

- Test 2 (end of week 4)
- Listen carefully to each question.
- I will read each question twice before you write your answer

Question 1

A jug holds 5 cups of water. How many cups will 3 jugs hold?



Question 2

Michael rolled 5 on his dice.

Ann rolled 3 on hers. Paul

rolled 4 on his .

What was the total score?



Question 3

What do I add to 9 to
make 13?

Question 4

What is 8 plus 4?

Question 5

What is 7 add 8?

Question 6

Draw two coins to total
15p.

Question 7

Chews cost 3p each.

How much for 3

chews?



Question 8

What is $16 - 10 - 3$?

Question 9

Take 4 from 19.

Question 10

You have 11p. You find 10p. How much do you have now?




Answers

1. A jug holds 5 cups of water. How many cups will 3 jugs hold? **(15)**
2. Michael rolled 5 on his dice. Ann rolled 3 on hers. Paul rolled 4 on his .What was the total score? **(12)**
3. What do I add to 9 to make 13? **(4)**
4. What is 8 plus 4? **(12)**
5. What is 7 add 8?**(15)**
6. Draw two coins to total 15p **(10p 5p)**
7. Chews cost 3p each. How much for 3 chews? **(9p)**
8. What is $16 - 10 - 3$? **(3)**
9. Take 4 from 19. **(15)**
10. You have 11p. You find 10p. How much do you have now? **(21p)**

Year 1 Block 3 Test 2
Answer Sheet

Hand Out

Name: _____	Date: _____
-------------	-------------

1.  holds 5 cups 3 jugs hold <input type="text"/> cups	6. 15p
2.  Total score is <input type="text"/>	7.  3p 3 chews cost <input type="text"/>
3. <input type="text"/>	8. <input type="text"/> 16 - 10 - 3 leaves
4. <input type="text"/>	9. <input type="text"/>
5. <input type="text"/>	10. 11p + 10p = <input type="text"/>

References and additional resources.

The questions and ideas for this PowerPoint came from:
Wigan LEA Numeracy Centre
Year1 Mental Arithmetic Tests

Thank You

PowerPoint template published by www.ksosoft.com

All the planning for this unit can be found at:
<http://www.wiganschoolsonline.net/curriculum/maths/assess.shtm>

Contains public sector information licensed under the Open Government Licence v3.0.
(<http://www.nationalarchives.gov.uk/doc/open-government-licence/version/3/>)

All images used in this PowerPoint was found at the free Public Domain Clip Art site. (<https://openclipart.org/>)
<http://www.clker.com> or were included in the original document.

Where Can I Find More Resources Like This?

- You can now visit my teaching resource website at <http://www.DrFog.co.uk>
- You can [click here](#) to search for more of my teaching resources.
- [Click here](#) to visit my **YES shop!**