

**Year 1**  
**Block 2 Assessment**  
**Paper 1**  
**(Answers at the end of the quiz)**




## Question 1

Write the missing numbers

1	2	3	4				8	9	10
---	---	---	---	--	--	--	---	---	----



# How many balloons?



## Question 3


**Draw 8 spots on the shirt.**



Question 4

An apple weighs 8 cubes.

A pear weighs 9 cubes.



Which is heavier?

## Question 5

An apple  
costs 5p  
How much  
will 2  
apples cost  
?



Question 6

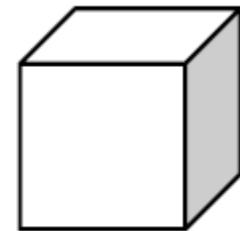

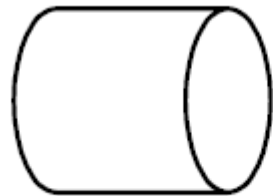
Draw a crayon that is **shorter** than this one



Draw a snake **thicker** than this one

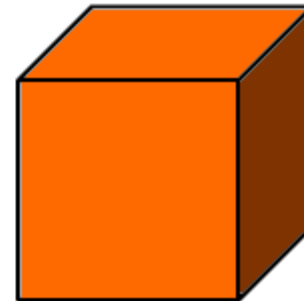
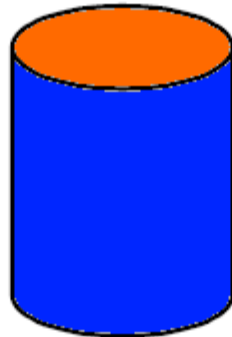



Tick (✓) the shapes with  
only straight edges





Match these shapes to their names.



**Cylinder**

**cube**

**triangle**

## Question 9

$$10 - \square = 2$$

$$8 + \square = 10$$



## Question 10

**What is the total of ?**

$$6 + 2 + 4$$



# Question 11

Continue the pattern.....

10	15		25	30			45
----	----	--	----	----	--	--	----



Question 12

You have 18p. You  
spend 7p. How much  
is left?



## Question 13



**10 more than 15 is**

**1 less than 23 is**



## Question 14

An elephant weighs 12 bricks. A mouse weighs 3 bricks. What is the difference between their weights?



Question 15

I have 24 bananas. I  
sell 8 of them.

**How many are left?**





# Answers

<b>Question</b>	<b>Answer</b>	<b>Level</b>	<b>Comments</b>
1	5, 6, 7	1b	1 mark
2	13	1b	1 mark
3	Any arrangement of 8	1b	1 mark
4	pear	1b	1 mark
5	10p	1a	1 mark
6	Shorter thicker	1a	1 mark for each
7	Cube cuboid pyramid	1a	1 for 2 correct 2 for all
8	Correct identification	2c	1 mark for 2 2 for all correct
9	8, 2	2c	1 mark for each
10	12	2c	1 mark
11	20, 35, 40	2c	1 mark for 2 2 for all correct
12	11p	2c	1 mark
13	25, 22	2c	1 mark for each
14	9 bricks	2b	1 mark
15	16	2b	1 mark

## Draft Level Thresholds Y1 Block 2

<b>Below Level 1c</b>	<b>Level 1</b>			<b>Level 2</b>	
<b>0 - 4</b>	<b>5 - 23</b>			<b>24 - 39</b>	
	<b>1c</b>	<b>1b</b>	<b>1a</b>	<b>2c</b>	<b>2b</b>
	<b>5-7</b>	<b>8-12</b>	<b>13-23</b>	<b>24-33</b>	<b>34-39</b>

**Total Marks for Part 1 and 2 = 39 marks**



# Student's Test Paper

If you would like a copy of the student test paper to print out, please click here.

[Student Test Paper Year 1 Block 2.](#)



# References and additional resources.

The questions and ideas for this PowerPoint came from:  
Wigan LEA Numeracy Centre  
Year1 Block 1 Assessment

## *Thank You*

PowerPoint template published by [www.ksosoft.com](http://www.ksosoft.com)

All the planning for this unit can be found at:  
<http://www.wiganschoolsonline.net/curriculum/math/assess.shtm>

Contains public sector information licensed under the Open Government Licence v3.0.  
(<http://www.nationalarchives.gov.uk/doc/open-government-licence/version/3/>)

All images used in this PowerPoint was found at the free Public Domain Clip Art site. (<https://openclipart.org/>)  
<http://www.clker.com> or were included in the original document.



# Where Can I Find More Resources Like This?

- You can now visit my teaching resource website at <http://www.DrFog.co.uk>
- You can [click here](#) to search for more of my teaching resources.
- [Click here](#) to visit my TES shop!

