

Year1
Block 2 Assessment
Paper 1
(Answers after each question)



Question 1

Write the missing numbers

1	2	3	4				8	9	10
---	---	---	---	--	--	--	---	---	----




Answers

5, 6, 7



How many balloons?



Answers

13



Question 3

Draw 8 spots on the shirt.



Answers


Any arrangement of 8



Question 4

An apple weighs 8 cubes.

A pear weighs 9 cubes.



Which is heavier?

Answers

pear



Question 5

An apple
costs 5p
How much
will 2
apples cost
?



Answers

10p



Question 6

Draw a crayon that is **shorter** than this one



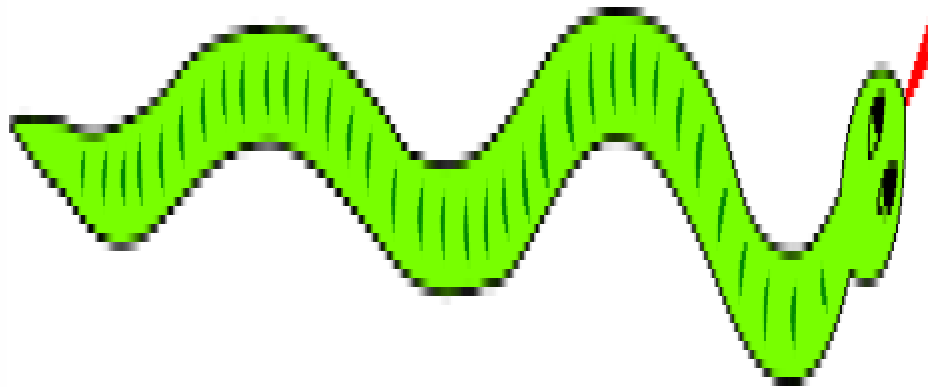
Draw a snake **thicker** than this one



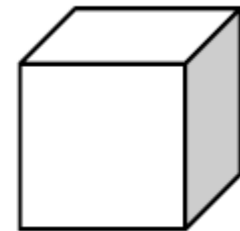

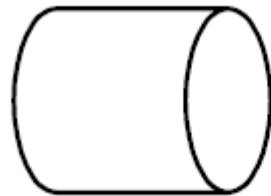
Shorter



thicker



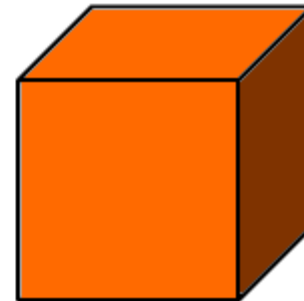
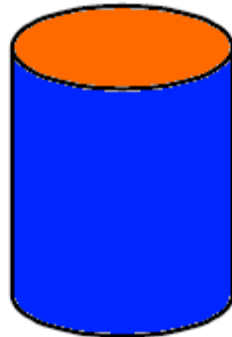

Tick (✓) the shapes with
only straight edges



Cube
cuboid
pyramid



Match these shapes to their names.



Cylinder

cube

triangle

Triangle
Cylinder
Cube



Question 9

$$10 - \square = 2$$

$$8 + \square = 10$$



Answers

8

2



Question 10

What is the total of ?

$$6 + 2 + 4$$



Answers

12



Question 11

Continue the pattern.....

10	15		25	30			45
----	----	--	----	----	--	--	----



Answers

20

35 40



Question 12

You have 18p. You
spend 7p. How much
is left?



Answers

11p



Question 13

10 more than 15 is

1 less than 23 is



Answers



25

22



Question 14

An elephant weighs 12 bricks. A mouse weighs 3 bricks. What is the difference between their weights?



Answers

9 bricks



Question 15

I have 24 bananas. I
sell 8 of them.

How many are left?



Answers

16



Answers

Question	Answer	Level	Comments
1	5, 6, 7	1b	1 mark
2	13	1b	1 mark
3	Any arrangement of 8	1b	1 mark
4	pear	1b	1 mark
5	10p	1a	1 mark
6	Shorter thicker	1a	1 mark for each
7	Cube cuboid pyramid	1a	1 for 2 correct 2 for all
8	Correct identification	2c	1 mark for 2 2 for all correct
9	8, 2	2c	1 mark for each
10	12	2c	1 mark
11	20, 35, 40	2c	1 mark for 2 2 for all correct
12	11p	2c	1 mark
13	25, 22	2c	1 mark for each
14	9 bricks	2b	1 mark
15	16	2b	1 mark

Draft Level Thresholds Y1 Block 2

Below Level 1c	Level 1			Level 2	
0 - 4	5 - 23			24 - 39	
	1c	1b	1a	2c	2b
	5-7	8-12	13-23	24-33	34-39

Total Marks for Part 1 and 2 = 39 marks



Student's Test Paper

If you would like a copy of the student test paper to print out, please click here.

[Student Test Paper Year 1 Block 2.](#)



References and additional resources.

The questions and ideas for this PowerPoint came from:
Wigan LEA Numeracy Centre
Year1 Block 1 Assessment

Thank You

PowerPoint template published by www.ksosoft.com

All the planning for this unit can be found at:
<http://www.wiganschoolsonline.net/curriculum/math/assess.shtm>

Contains public sector information licensed under the Open Government Licence v3.0.
(<http://www.nationalarchives.gov.uk/doc/open-government-licence/version/3/>)

All images used in this PowerPoint was found at the free Public Domain Clip Art site. (<https://openclipart.org/>)
<http://www.clker.com> or were included in the original document.



Where Can I Find More Resources Like This?

- You can now visit my teaching resource website at <http://www.DrFog.co.uk>
- You can [click here](#) to search for more of my teaching resources.
- [Click here](#) to visit my TES shop!

