



Year 1
Mental Maths
Test 6 Week 12



Term 2

Instructions

- Test 6 (end of week 12)
- Listen carefully to each question.
- I will read each question twice before you write your answer



Question 1

What number comes
next?

3,6,9,12,?

Question 2

Double the number in the box. Write your answer in the circle.



Question 3

What do I have to add to
8p to make 16p?

Question 4

An ant has six legs. How many legs do 2 ants have altogether?




Question 5

5 lots of 2

Question 6

A table has 4 legs. How
many legs on 2

tables?



Question 7

An apple costs 5p a
banana costs 4p.
What is the total cost?



4p



5p

Question 8

Write 19 using the
word.

Question 9

16 minus 10 is?

Question 10

Count the balloons.
How many more do
you need to take 20?



Answers

10 Second Response





1. What number comes next? 3,6,9,12,? **(15)**
2. Double the number in the box. Write your answer in the circle. **(12)**
3. What do I have to add to 8p to make 16p? **(8p)**
4. An ant has six legs. How many legs do 2 ants have altogether? **(12)**
5. 5 lots of 2 **(10)**
6. A table has 4 legs. How many legs on 2 tables? **(8)**
7. An apple costs 5p a banana costs 4p. What is the total cost? **(9p)**
8. Write 19 using the word. **(nineteen)**
9. 16 minus 10 is? **(6)**
10. Count the balloons. How many more do you need to take 20? **(6)**

Year 1 Block 2 Test 6
Answer Sheet

Hand Out

Name: _____

Date: _____

1.	<input type="text"/>	6.	 2 chairs have <input type="text"/> legs
2.	<input type="text" value="6"/>	7.	 4p  5p <input type="text"/> p altogether
3.	<input type="text"/>	8.	<input type="text"/>
4.	 2 ants have <input type="text"/> legs	9.	16 minus 10 is <input type="text"/>
5.	<input type="text"/>	10.	pppppp pppppp pppppp <input type="text"/>

References and additional resources.

The questions and ideas for this PowerPoint came from:
Wigan LEA Numeracy Centre
Year1 Mental Arithmetic Tests

Thank You

PowerPoint template published by www.ksosoft.com

All the planning for this unit can be found at:
<http://www.wiganschoolsonline.net/curriculum/maths/assess.shtm>

Contains public sector information licensed under the Open Government Licence v3.0.
(<http://www.nationalarchives.gov.uk/doc/open-government-licence/version/3/>)

All images used in this PowerPoint was found at the free Public Domain Clip Art site. (<https://openclipart.org/>)
<http://www.clker.com> or were included in the original document.

Where Can I Find More Resources Like This?

- You can now visit my teaching resource website at <http://www.DrFog.co.uk>
- You can [click here](#) to search for more of my teaching resources.
- [Click here](#) to visit my **YES shop!**