

Year 1
Mental Maths
Test 1 Week 2



Term 2

Instructions

- Test 1 (end of week 2)
- Listen carefully to each question.
- I will read each question twice before you write your answer

Question 1

What number is 1
more than 18?

Question 2

What is 10 more than
2?

Question 3



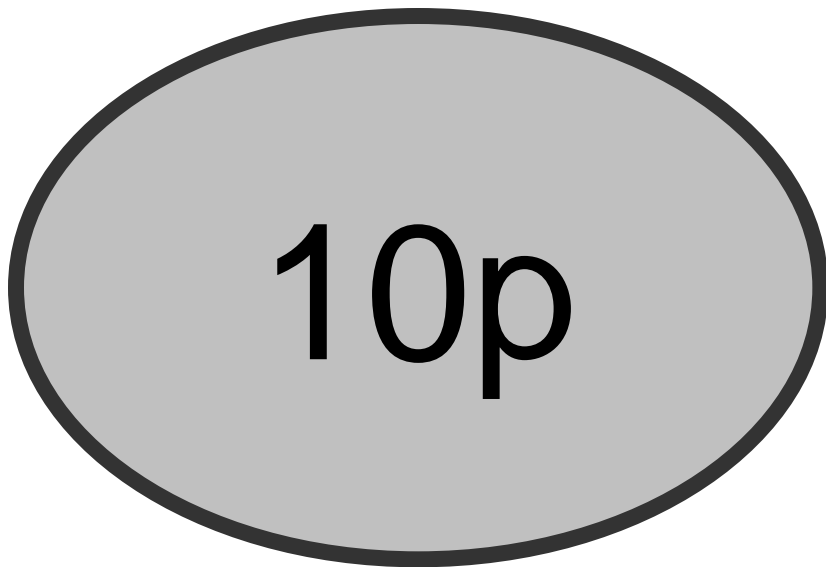
Write the missing number in the box.

15

17

Question 4

What **change** will I get from 10p if I spend 6p?



Question 5

What is 5 plus 6?

Question 6

Write 2 numbers
that make 10.

$$\square + \square = 10$$

Question 7

If I have 3 boxes and I buy 10 more. How many will I have?

Question 8

Fill in the missing numbers on the number track

12	13			16		18
----	----	--	--	----	--	----

Question 9

My friend had 24 sweets. I
have 10 less.

How many do I have?

Put a ring around the correct
answer on your sheet

4 14 34 24

Question 10

What is 1 more than
20?

Answers

10 Second Response

1. What number is 1 more than 18? **(19)**
2. What is 10 more than 2? **(12)**
3. Write the missing number in the box. **(16)**
4. What change will I get from 10p if I spend 6p? **(4p)**
5. What is 5 plus 6? **(11)**
6. Write 2 numbers that make 10.
7. If I have 3 boxes and I buy 10 more. How many will I have? **(13)**
8. Fill in the missing numbers on the number track **(14,15,17)**
9. My friend had 24 sweets. I have 10 less. How many do I have? Put a ring around the correct answer on your sheet **(14)**
10. What is 1 more than 20? **(21)**

Year 1 Block 2 Test 1
Answer Sheet

Hand Out

Name:	Date:
--------------	--------------

1.	<input type="text"/>	6.	<input type="text"/> + <input type="text"/> = 10				
2.	<input type="text"/>	7.	<input type="text"/> boxes				
3.	<input type="text"/> 15 <input type="text"/> 17	8.	<table border="1"><tr><td>12</td><td>13</td><td>16</td><td>18</td></tr></table>	12	13	16	18
12	13	16	18				
4.	<input type="text"/> p	9.	4 14 34 24				
5.	<input type="text"/>	10.	<input type="text"/>				

References and additional resources.

The questions and ideas for this PowerPoint came from:
Wigan LEA Numeracy Centre
Year1 Mental Arithmetic Tests

Thank You

PowerPoint template published by www.ksosoft.com

All the planning for this unit can be found at:
<http://www.wiganschoolsonline.net/curriculum/maths/assess.shtm>

Contains public sector information licensed under the Open Government Licence v3.0.
(<http://www.nationalarchives.gov.uk/doc/open-government-licence/version/3/>)

All images used in this PowerPoint was found at the free Public Domain Clip Art site. (<https://openclipart.org/>)
<http://www.clker.com> or were included in the original document.

Where Can I Find More Resources Like This?

- You can now visit my teaching resource website at <http://www.DrFog.co.uk>
- You can [click here](#) to search for more of my teaching resources.
- [Click here](#) to visit my **YES shop!**