

Year1
Block 1 Assessment
Paper 2
(Answers at the end of the quiz)



Question 1


Write 1 more than 8

Write 1 less than 6



Question 2

Put a circle around the
4th dog




What are the missing numbers?

$$\triangle + \square = 7$$



Question 4

John has 5 sweets. He eats 2. How many has he left?



Question 5

When do you eat
breakfast? Put a ✓ in
the correct box.

evening

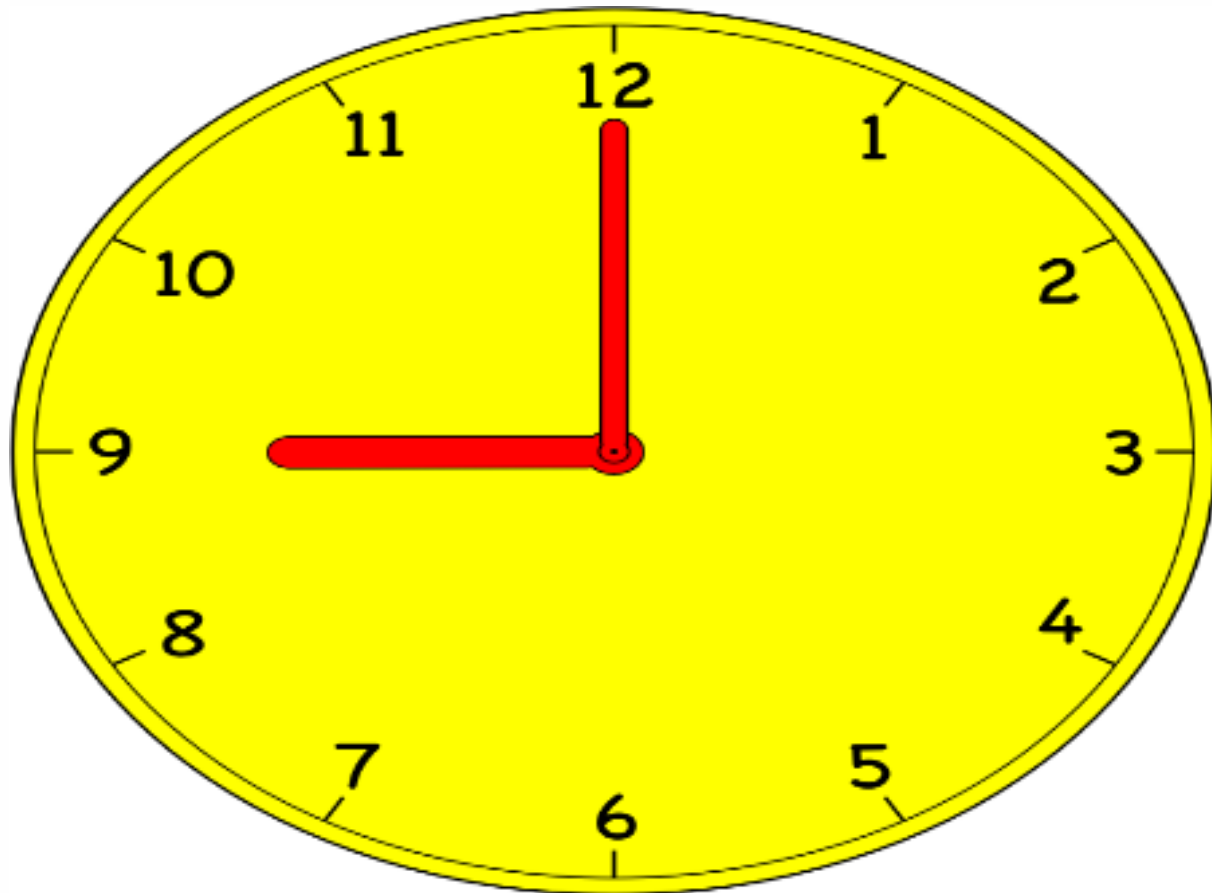
morning

afternoon



Question 6

What time is it?



Question 7

Put a ✓ on the odd numbers

2 3 5 6 9 16



What is the missing number?

$$10 = \square + 8$$



Question 9

9 take away 5 is




Question 10

A boy has 12 sweets.

He gives 5 away.

How many are left?



Question 11

more than $4 = 10$





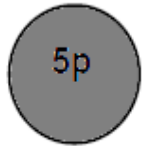
Question 12

3 less than 10 is



Question 13

13. Tick the coins to
total 8p



Question 14

How many children go to bed at 8 o'clock?

A pictogram to show the times a class go to bed

7 o'clock



half past 7



8 o'clock



How many children in the class altogether?



Question 15

What is double 4
plus 2?



Answers

Question number	Answer	Level	Comments
1	9,5	1a	1 mark for each correct (2)
2	4 th dog	1b	1 mark
3	Any combination to total 7	2c	1 mark
4	3	1a	1 mark
5	morning	1b	1 mark
6	9 o'clock	2c	1 mark
7	3,5,9	2c	2 marks for all correct 1 mark for 1 or 2
8	2	2c	1 mark
9	4	1a	1 mark
10	7	2c	1 mark
11	6	1a	1 mark
12	7	1a	1 mark
13	5p 2p 1p	2b	1 mark
14	3,9	2a	1 mark for each correct(2)
15	10	2b	1 mark



What is my level?

If you add the score from Block 1 Year 1 paper one and paper 2, you get a level.

Draft Level Thresholds Y1 Block 1

Below Level 1	Level 1			Level 2
0 - 5	6 - 30			31 – 34
	1c	1b	1a	2c
	6-10	11-25	26-30	

Total Marks for Part 1 and 2 = 34 marks

Student's Test Paper

If you would like a copy of the student test paper to print out, please click here.

[Student Test Paper Year 1 Block 1.](#)



References and additional resources.

The questions and ideas for this PowerPoint came from:
Wigan LEA Numeracy Centre
Year1 Block 1 Assessment

Thank You

PowerPoint template published by www.ksosoft.com

All the planning for this unit can be found at:
<http://www.wiganschoolsonline.net/curriculum/math/assess.shtm>

Contains public sector information licensed under the Open Government Licence v3.0.
(<http://www.nationalarchives.gov.uk/doc/open-government-licence/version/3/>)

All images used in this PowerPoint was found at the free Public Domain Clip Art site. (<https://openclipart.org/>)
<http://www.clker.com> or were included in the original document.



Where Can I Find More Resources Like This?

- You can now visit my teaching resource website at <http://www.DrFog.co.uk>
- You can [click here](#) to search for more of my teaching resources.
- [Click here](#) to visit my TES shop!

