

Year1
Block 1 Assessment
Paper 1
(Answers after each question)



Question 1

Write the missing numbers.

1	2			5	6	7	
---	---	--	--	---	---	---	--



Answer

3,4,8



Question 2

Write the number
seven in the box.

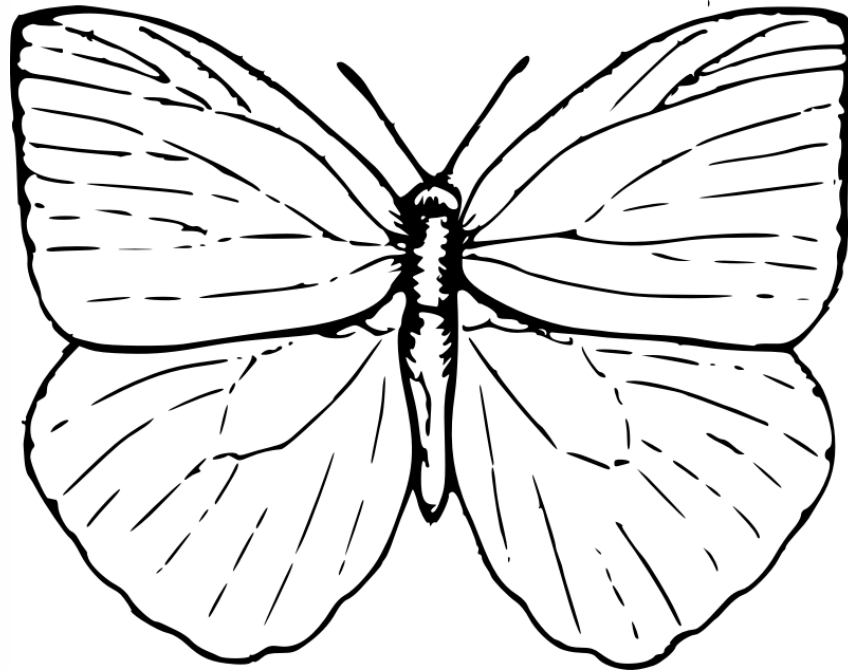


Answer

7



Draw 6 spots on
the butterfly



Answer

**Any arrangement
of 6**



How many rocking horses?




Answer

9



What is the name of
this shape?



Put a circle around
the correct answer.

triangle

square

rectangle




Answer



rectangle



Continue the pattern.



Answer



Question 7

Write a number in the box so that the three numbers are in order.

5

11



Answer

6 or

7 or

8 or

9 or

10



Write the numbers
between 15 and 20

15					20
----	--	--	--	--	----



Answer

16, 17, 18, 19



Write the missing numbers.

0

2

6

10




Answer

4,8



Name the heavier animal.

Cat



Dog



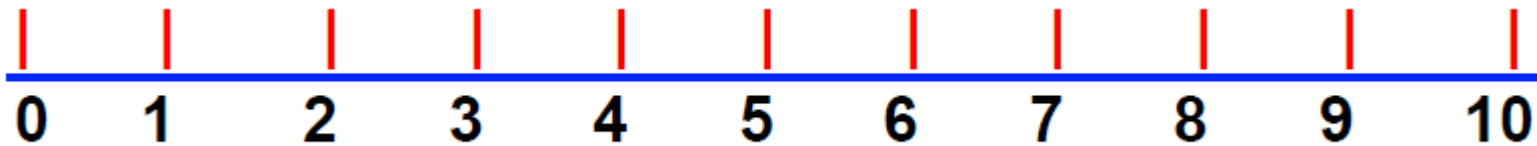
Answer

Cat



Question 11

Start at 2. Count on 5.
What number do you
land on?



Answer

7



Question 12

5 plus 3 =



Answer

8



Question 13

$$\square + 5 = 10$$




Answer

5



Question 14

Which is more? Put a  next to the correct answer

23p

or

13p



Answer

23p



Question 15

I'm thinking of a number. I take 7 from it and the answer is 3. What is my number?



Answer

10



Answers

Question number	Answer	Level	Comments
1	3,4,8	1b	1 mark
2	7	1b	1 mark
3	Any arrangement of 6	1c	1 mark
4	9	1b	1 mark
5	rectangle	1c	1 mark
6	□□	1a	1 mark
7	6 or 7 or 8 or 9 or 10	1a	1 mark
8	16, 17, 18, 19	1a	1 mark for 2 2 for all correct
9	4,8	2c	1 mark
10	Tick on cat	1b	1 mark
11	7	1a	1 mark
12	8	1a	1 mark
13	5	1a	1 mark
14	23p	2b	1 mark
15	10	2b	1 mark

What is my level?

If you add the score from Block 1 Year 1 paper one and paper 2, you get a level.

Draft Level Thresholds Y1 Block 1

Below Level 1	Level 1			Level 2
0 - 5	6 - 30			31 – 34
	1c	1b	1a	2c
	6-10	11-25	26-30	

Total Marks for Part 1 and 2 = 34 marks

Student's Test Paper

If you would like a copy of the student test paper to print out, please click here.

[Student Test Paper Year 1 Block 1.](#)



References and additional resources.

The questions and ideas for this PowerPoint came from:
Wigan LEA Numeracy Centre
Year1 Block 1 Assessment

Thank You

PowerPoint template published by www.ksosoft.com

All the planning for this unit can be found at:
<http://www.wiganschoolsonline.net/curriculum/math/assess.shtm>

Contains public sector information licensed under the Open Government Licence v3.0.
(<http://www.nationalarchives.gov.uk/doc/open-government-licence/version/3/>)

All images used in this PowerPoint was found at the free Public Domain Clip Art site. (<https://openclipart.org/>)
<http://www.clker.com> or were included in the original document.



Where Can I Find More Resources Like This?

- You can now visit my teaching resource website at <http://www.DrFog.co.uk>
- You can [click here](#) to search for more of my teaching resources.
- [Click here](#) to visit my TES shop!

