

Year 1
Mental Maths
Test 5 Week 10



Term 1

Instructions

- Test 5 (end of week 10)
- Listen carefully to each question.
- I will read each question twice before you write your answer

Question 1

Write 2 numbers that
total 5

$$\square + \square = 5$$

Question 2

What is 10 take away
6?

Question 3

What is 3 less than 9

Question 4

There were 11 apples in a bag. I ate 2 of them. How many were left?



Question 5

I went on holiday for 5 days with my sister and 3 more days with my mum.


How many days was I on holiday altogether?

**5 with my sister
3 with my mum**

Question 6

There are 9 children in the book corner. Five go and play in the home corner.

How many children are left in the book corner?

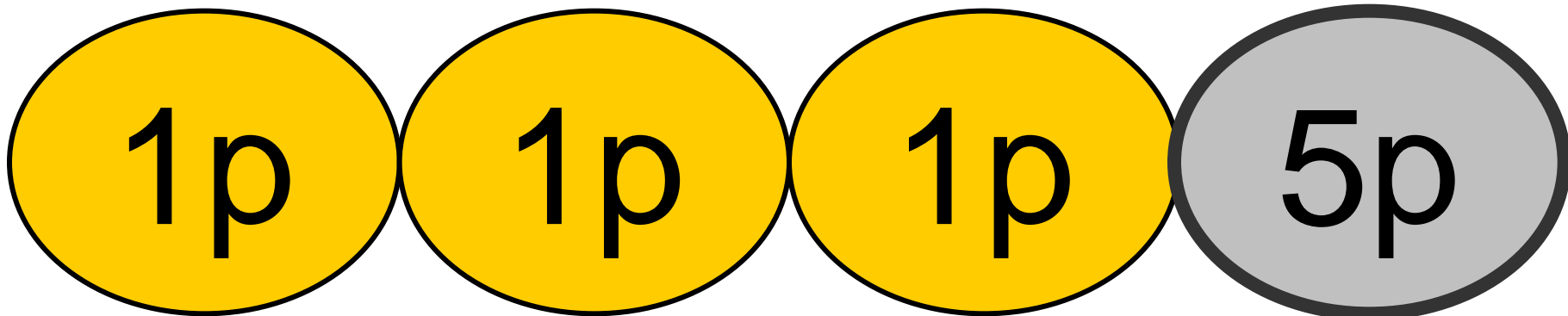


Question 7

What is the *difference*
between 13 and 11?

Question 8



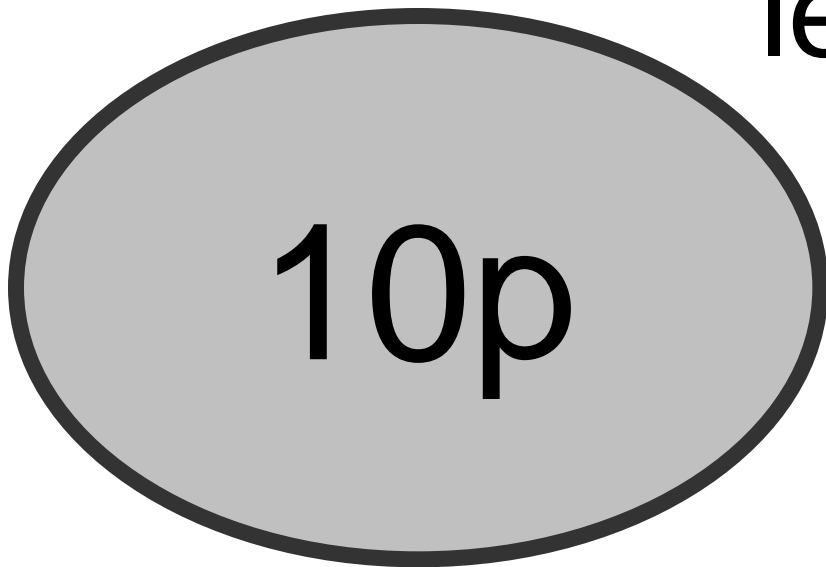
If I had a 5p piece and 3
x1 pence pieces. How
much will I have
altogether?



Question 9


I went to the shop with 10p. I spent 5p. How much have I

left?




Question 10

A bar of chocolate is 5p. How much is two



5p

bars



5p

Answers

10 Second Response


1. Write 2 numbers that total 5 **(0,5 1,4 2,3 etc)**
2. What is 10 take away 6? **(4)**
3. What is 3 less than 9 **(6)**
4. There were 11 apples in a bag. I ate 2 of them. How many were left? **(9)**
5. I went on holiday for 5 days with my sister and 3 more days with my mum. How many days was I on holiday altogether?**(8)**
6. There are 9 children in the book corner. Five go and play in the home corner. How many children are left in the book corner? **(4)**
7. What is the difference between 13 and 11? **(2)**
8. If I had a 5p piece and 3 x1 pence pieces. How much will I have altogether? **(8p)**
9. I went to the shop with 10p. I spent 5p. How much have I left? **(5p)**
10. A bar of chocolate is 5p. How much is two bars? **(10p)**

Year 1 Block 1 Test 5
Answer Sheet

Hand Out

Name:

Date:

1.	<input type="text"/> + <input type="text"/> = 5	 <input type="text"/> children
2.	<input type="text"/>	<input type="text"/>
3.	<input type="text"/>	<input type="text"/> p
4.	<input type="text"/> apples	<input type="text"/> p
5.	5 with my sister 3 with my mum	<input type="text"/> p

References and additional resources.

The questions and ideas for this PowerPoint came from:
Wigan LEA Numeracy Centre
Year1 Mental Arithmetic Tests

Thank You

PowerPoint template published by www.ksosoft.com

All the planning for this unit can be found at:
<http://www.wiganschoolsonline.net/curriculum/maths/assess.shtm>

Contains public sector information licensed under the Open Government Licence v3.0.
(<http://www.nationalarchives.gov.uk/doc/open-government-licence/version/3/>)

All images used in this PowerPoint was found at the free Public Domain Clip Art site. (<https://openclipart.org/>)
<http://www.clker.com> or were included in the original document.

Where Can I Find More Resources Like This?

- You can now visit my teaching resource website at <http://www.DrFog.co.uk>
- You can [click here](#) to search for more of my teaching resources.
- [Click here](#) to visit my **YES shop!**