

Place Value, Estimating and Rounding

Year 2 Summer Term Week 2

Lesson 4

Today we will be learning to:

- understand and use the words about comparing and ordering numbers
- give a number between two other numbers
- give a number which lies halfway between two numbers on a number line.

Mental Activity

Empty hundred square

How many numbers can you fill in?



Main Activity

Today we are going to find numbers that lie between two other numbers.

What does
between mean?

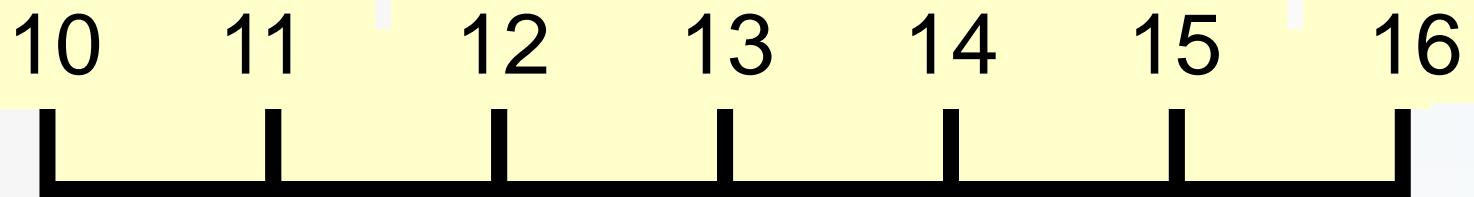
Between means
more than the
smaller number, but
less than the larger
number.



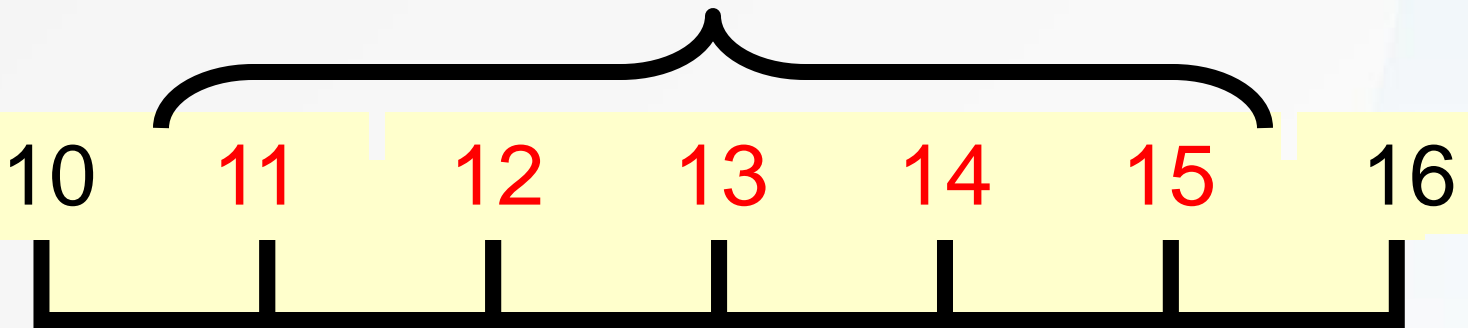
What do you understand by the word
'between'?

Give me a number between 10 and 16.

Did you know you can't use 10 or 16?



Which numbers are between
10 and 16?



These numbers are between
10 and 16.

What does 'halfway between' mean?



I will lay out 20 cards.

Which number is halfway between
1 and 5?

Top Tip

‘Halfway between’ is an equal distance from each number.


Which number is halfway between
10 and 20?

Which number is halfway between
15 and 19?

Which number is halfway between
9 and 13?

Which number is halfway between
14 and 16?

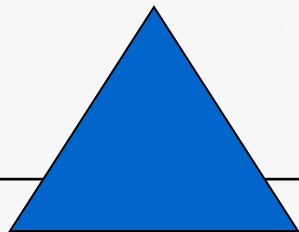
Group Work



Work out which number is halfway between two numbers on a number line.



Practise finding the number that is halfway between two numbers.



Set a 'halfway between' problem for a classmate to solve.