

# Money





**Year 2 Spring Term Week 4**

**Lesson 2**

Today we will be learning to:

- solve money word problems
- recognise and use different value coins
- select the right coins to pay.

# Mental Activity



Tea 12p



Fizzy pop 13p



Orange juice 14p



Milkshake 15p



Fruit 25p






Crisps 31p







Ice cream 34p



Sandwich 42p



Make these circles into coins.



Tea 12p



Fizzy pop 13p



Orange juice 14p



Milkshake 15p



Fruit 25p







Crisps 31p







Ice cream 34p



Sandwich 42p



What would you like to buy?



Tea 12p



Fizzy pop 13p



Orange juice 14p



Milkshake 15p



Fruit 25p







Crisps 31p







Ice cream 34p



Sandwich 42p



Which coins could you use?



Tea 12p



Fizzy pop 13p



Orange juice 14p



Milkshake 15p



Fruit 25p







Crisps 31p



Ice cream 34p







Sandwich 42p



Choose other items.





Tea 12p



Fizzy pop 13p



Orange juice 14p



Milkshake 15p



Fruit 25p







Crisps 31p



Ice cream 34p



Sandwich 42p



How could you pay for them?

# Main Activity

Today we are going to show

which coins we could use

to pay for our items.



In your last lesson, what did you learn?

Today we will continue looking at which coins we could use for each item.

These are the coins we can use.



You choose two items that cost a total of 46p.

Which coins could you use?

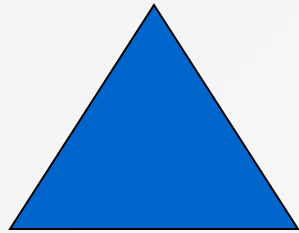
These are the coins we can use.




You choose two items that cost a total of 46p.

Is there a way that you could use fewer coins?


# Group Work



Choose two items from the café menu. Which coins could you use to pay for your choices? Could you use fewer coins?



Choose two items from the café menu. Use coins to make up the totals.



Choose two items from the café menu. Which coins could you use to pay for your choices?